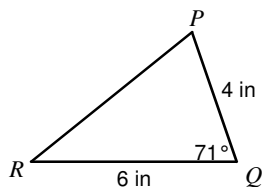


Area of a Triangle

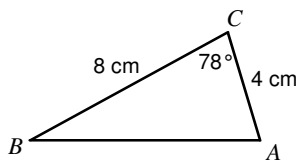
© 2014 Kuta Software LLC. All rights reserved.

Find the area of each triangle to the nearest tenth.

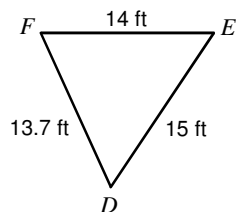
1)



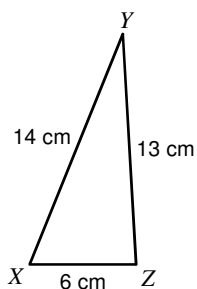
2)



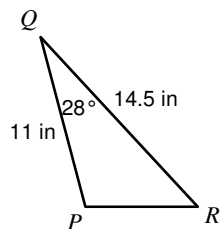
3)



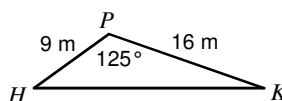
4)



5)



6)



Solve each equation by using the Quadratic Formula.

7) $3v^2 + v - 2 = -4v$

8) $15b^2 - 35b + 15 = 5b^2$

9) $-2n^2 - 10n + 8 = -5n^2$

10) $12x^2 + 27x + 5 = -1$

Answers to Area of a Triangle

1) 11.3 in^2

5) 37.4 in^2

9) $\left\{\frac{4}{3}, 2\right\}$

2) 15.7 cm^2

6) 59 m^2

10) $\left\{-\frac{1}{4}, -2\right\}$

3) 87.3 ft^2

7) $\left\{\frac{1}{3}, -2\right\}$

4) 38.9 cm^2

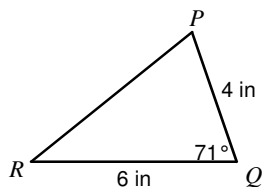
8) $\left\{\frac{1}{2}, 3\right\}$

Area of a Triangle

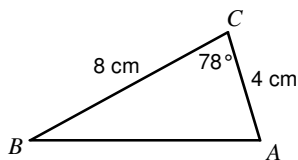
© 2014 Kuta Software LLC. All rights reserved.

Find the area of each triangle to the nearest tenth.

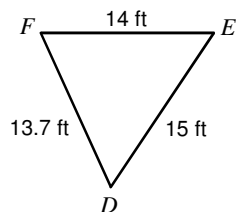
1)



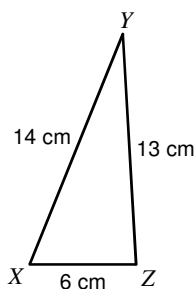
2)



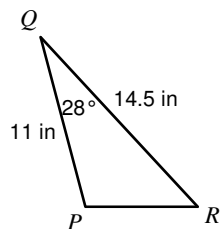
3)



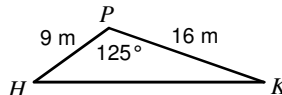
4)



5)



6)



Solve each equation by using the Quadratic Formula.

7) $3v^2 + v - 2 = -4v$

8) $15b^2 - 35b + 15 = 5b^2$

9) $-2n^2 - 10n + 8 = -5n^2$

10) $12x^2 + 27x + 5 = -1$

Answers to Area of a Triangle

1) 11.3 in^2

5) 37.4 in^2

9) $\left\{\frac{4}{3}, 2\right\}$

2) 15.7 cm^2

6) 59 m^2

10) $\left\{-\frac{1}{4}, -2\right\}$

3) 87.3 ft^2

7) $\left\{\frac{1}{3}, -2\right\}$

4) 38.9 cm^2

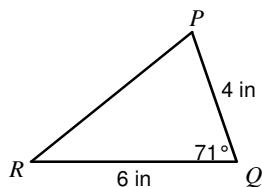
8) $\left\{\frac{1}{2}, 3\right\}$

Area of a Triangle

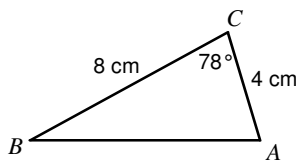
© 2014 Kuta Software LLC. All rights reserved.

Find the area of each triangle to the nearest tenth.

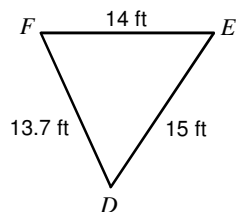
1)



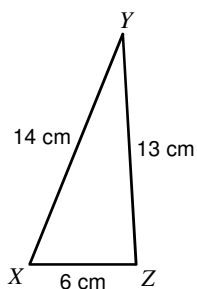
2)



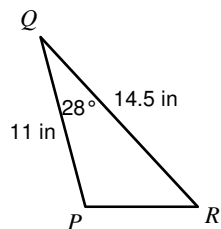
3)



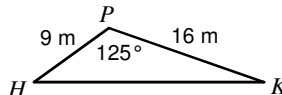
4)



5)



6)



Solve each equation by using the Quadratic Formula.

7) $3v^2 + v - 2 = -4v$

8) $15b^2 - 35b + 15 = 5b^2$

9) $-2n^2 - 10n + 8 = -5n^2$

10) $12x^2 + 27x + 5 = -1$

Answers to Area of a Triangle

1) 11.3 in^2

5) 37.4 in^2

9) $\left\{\frac{4}{3}, 2\right\}$

2) 15.7 cm^2

6) 59 m^2

10) $\left\{-\frac{1}{4}, -2\right\}$

3) 87.3 ft^2

7) $\left\{\frac{1}{3}, -2\right\}$

4) 38.9 cm^2

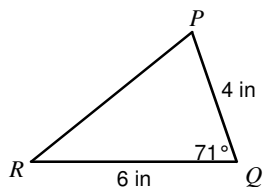
8) $\left\{\frac{1}{2}, 3\right\}$

Area of a Triangle

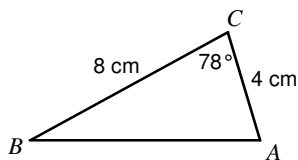
© 2014 Kuta Software LLC. All rights reserved.

Find the area of each triangle to the nearest tenth.

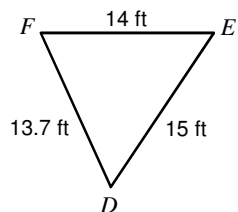
1)



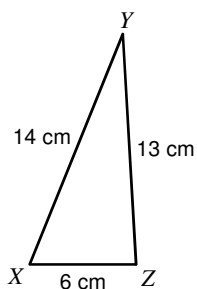
2)



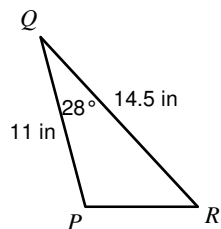
3)



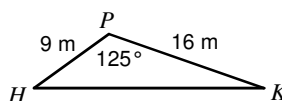
4)



5)



6)



Solve each equation by using the Quadratic Formula.

7) $3v^2 + v - 2 = -4v$

8) $15b^2 - 35b + 15 = 5b^2$

9) $-2n^2 - 10n + 8 = -5n^2$

10) $12x^2 + 27x + 5 = -1$

Answers to Area of a Triangle

1) 11.3 in^2

5) 37.4 in^2

9) $\left\{\frac{4}{3}, 2\right\}$

2) 15.7 cm^2

6) 59 m^2

10) $\left\{-\frac{1}{4}, -2\right\}$

3) 87.3 ft^2

7) $\left\{\frac{1}{3}, -2\right\}$

4) 38.9 cm^2

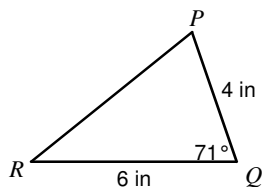
8) $\left\{\frac{1}{2}, 3\right\}$

Area of a Triangle

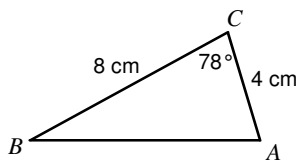
© 2014 Kuta Software LLC. All rights reserved.

Find the area of each triangle to the nearest tenth.

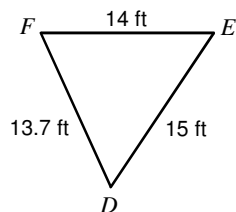
1)



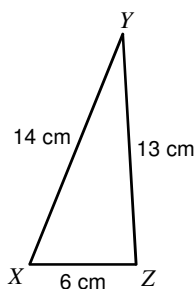
2)



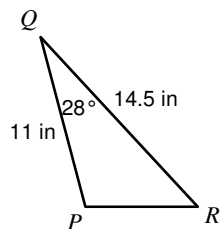
3)



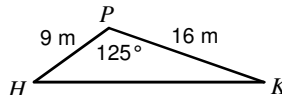
4)



5)



6)



Solve each equation by using the Quadratic Formula.

7) $3v^2 + v - 2 = -4v$

8) $15b^2 - 35b + 15 = 5b^2$

9) $-2n^2 - 10n + 8 = -5n^2$

10) $12x^2 + 27x + 5 = -1$

Answers to Area of a Triangle

1) 11.3 in^2

5) 37.4 in^2

9) $\left\{\frac{4}{3}, 2\right\}$

2) 15.7 cm^2

6) 59 m^2

10) $\left\{-\frac{1}{4}, -2\right\}$

3) 87.3 ft^2

7) $\left\{\frac{1}{3}, -2\right\}$

4) 38.9 cm^2

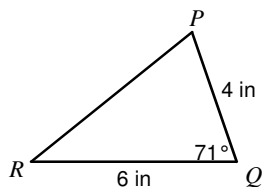
8) $\left\{\frac{1}{2}, 3\right\}$

Area of a Triangle

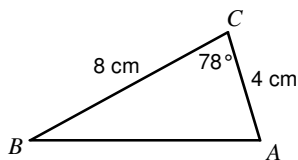
© 2014 Kuta Software LLC. All rights reserved.

Find the area of each triangle to the nearest tenth.

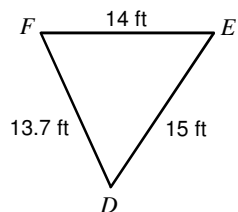
1)



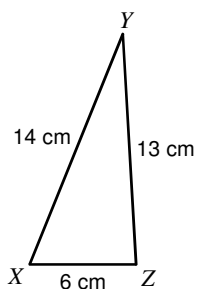
2)



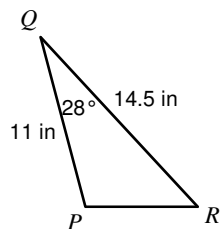
3)



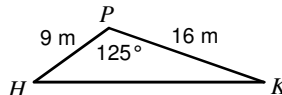
4)



5)



6)



Solve each equation by using the Quadratic Formula.

7) $3v^2 + v - 2 = -4v$

8) $15b^2 - 35b + 15 = 5b^2$

9) $-2n^2 - 10n + 8 = -5n^2$

10) $12x^2 + 27x + 5 = -1$

Answers to Area of a Triangle

1) 11.3 in^2

5) 37.4 in^2

9) $\left\{\frac{4}{3}, 2\right\}$

2) 15.7 cm^2

6) 59 m^2

10) $\left\{-\frac{1}{4}, -2\right\}$

3) 87.3 ft^2

7) $\left\{\frac{1}{3}, -2\right\}$

4) 38.9 cm^2

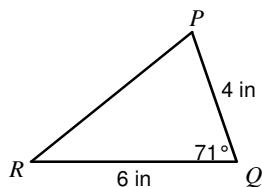
8) $\left\{\frac{1}{2}, 3\right\}$

Area of a Triangle

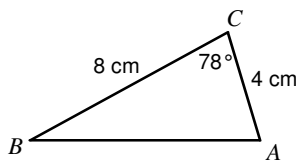
© 2014 Kuta Software LLC. All rights reserved.

Find the area of each triangle to the nearest tenth.

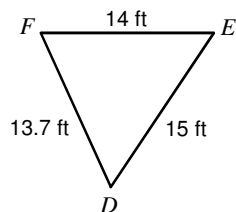
1)



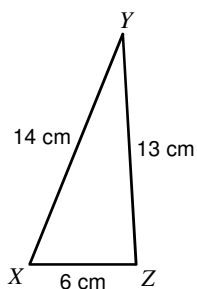
2)



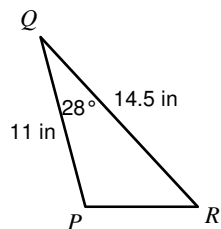
3)



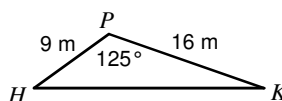
4)



5)



6)



Solve each equation by using the Quadratic Formula.

7) $3v^2 + v - 2 = -4v$

8) $15b^2 - 35b + 15 = 5b^2$

9) $-2n^2 - 10n + 8 = -5n^2$

10) $12x^2 + 27x + 5 = -1$

Answers to Area of a Triangle

1) 11.3 in^2

5) 37.4 in^2

9) $\left\{\frac{4}{3}, 2\right\}$

2) 15.7 cm^2

6) 59 m^2

10) $\left\{-\frac{1}{4}, -2\right\}$

3) 87.3 ft^2

7) $\left\{\frac{1}{3}, -2\right\}$

4) 38.9 cm^2

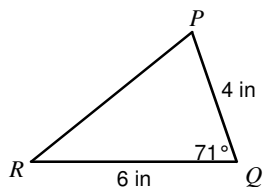
8) $\left\{\frac{1}{2}, 3\right\}$

Area of a Triangle

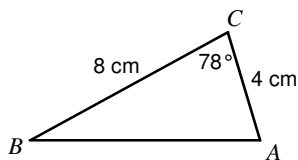
© 2014 Kuta Software LLC. All rights reserved.

Find the area of each triangle to the nearest tenth.

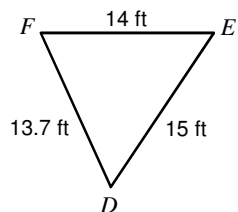
1)



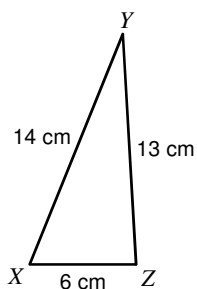
2)



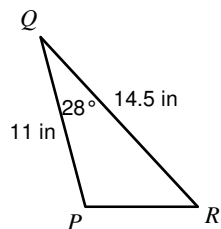
3)



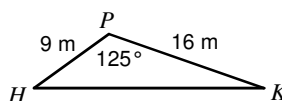
4)



5)



6)



Solve each equation by using the Quadratic Formula.

7) $3v^2 + v - 2 = -4v$

8) $15b^2 - 35b + 15 = 5b^2$

9) $-2n^2 - 10n + 8 = -5n^2$

10) $12x^2 + 27x + 5 = -1$

Answers to Area of a Triangle

1) 11.3 in^2

5) 37.4 in^2

9) $\left\{\frac{4}{3}, 2\right\}$

2) 15.7 cm^2

6) 59 m^2

10) $\left\{-\frac{1}{4}, -2\right\}$

3) 87.3 ft^2

7) $\left\{\frac{1}{3}, -2\right\}$

4) 38.9 cm^2

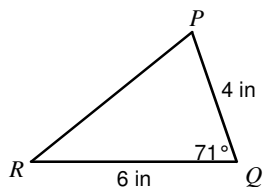
8) $\left\{\frac{1}{2}, 3\right\}$

Area of a Triangle

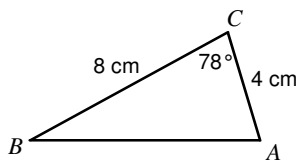
© 2014 Kuta Software LLC. All rights reserved.

Find the area of each triangle to the nearest tenth.

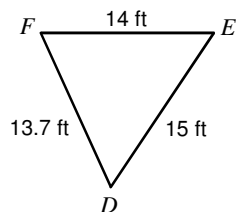
1)



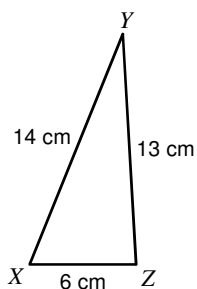
2)



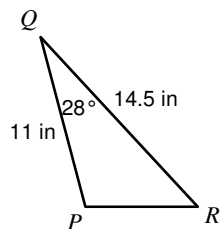
3)



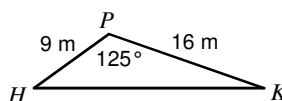
4)



5)



6)



Solve each equation by using the Quadratic Formula.

7) $3v^2 + v - 2 = -4v$

8) $15b^2 - 35b + 15 = 5b^2$

9) $-2n^2 - 10n + 8 = -5n^2$

10) $12x^2 + 27x + 5 = -1$

Answers to Area of a Triangle

1) 11.3 in^2

5) 37.4 in^2

9) $\left\{\frac{4}{3}, 2\right\}$

2) 15.7 cm^2

6) 59 m^2

10) $\left\{-\frac{1}{4}, -2\right\}$

3) 87.3 ft^2

7) $\left\{\frac{1}{3}, -2\right\}$

4) 38.9 cm^2

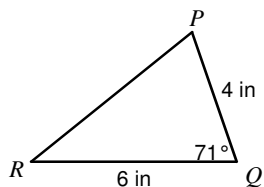
8) $\left\{\frac{1}{2}, 3\right\}$

Area of a Triangle

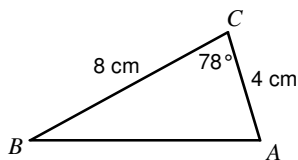
© 2014 Kuta Software LLC. All rights reserved.

Find the area of each triangle to the nearest tenth.

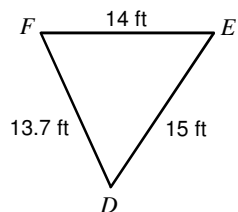
1)



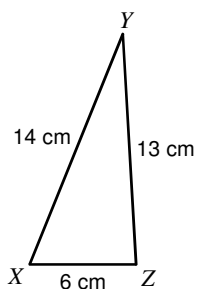
2)



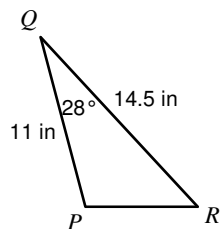
3)



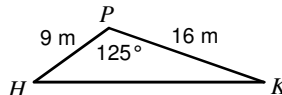
4)



5)



6)



Solve each equation by using the Quadratic Formula.

7) $3v^2 + v - 2 = -4v$

8) $15b^2 - 35b + 15 = 5b^2$

9) $-2n^2 - 10n + 8 = -5n^2$

10) $12x^2 + 27x + 5 = -1$

Answers to Area of a Triangle

1) 11.3 in^2

5) 37.4 in^2

9) $\left\{\frac{4}{3}, 2\right\}$

2) 15.7 cm^2

6) 59 m^2

10) $\left\{-\frac{1}{4}, -2\right\}$

3) 87.3 ft^2

7) $\left\{\frac{1}{3}, -2\right\}$

4) 38.9 cm^2

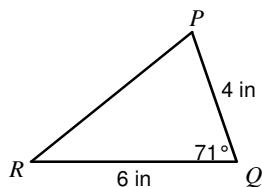
8) $\left\{\frac{1}{2}, 3\right\}$

Area of a Triangle

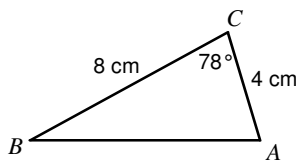
© 2014 Kuta Software LLC. All rights reserved.

Find the area of each triangle to the nearest tenth.

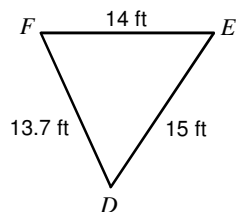
1)



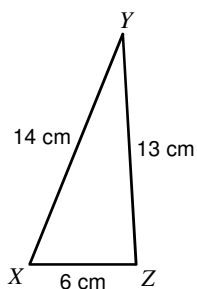
2)



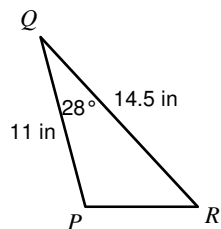
3)



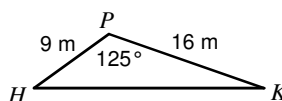
4)



5)



6)



Solve each equation by using the Quadratic Formula.

7) $3v^2 + v - 2 = -4v$

8) $15b^2 - 35b + 15 = 5b^2$

9) $-2n^2 - 10n + 8 = -5n^2$

10) $12x^2 + 27x + 5 = -1$

Answers to Area of a Triangle

1) 11.3 in^2

5) 37.4 in^2

9) $\left\{\frac{4}{3}, 2\right\}$

2) 15.7 cm^2

6) 59 m^2

10) $\left\{-\frac{1}{4}, -2\right\}$

3) 87.3 ft^2

7) $\left\{\frac{1}{3}, -2\right\}$

4) 38.9 cm^2

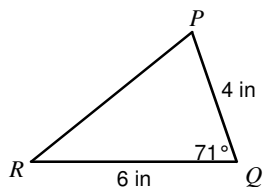
8) $\left\{\frac{1}{2}, 3\right\}$

Area of a Triangle

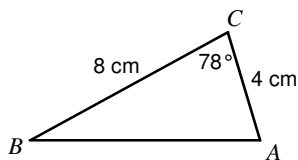
© 2014 Kuta Software LLC. All rights reserved.

Find the area of each triangle to the nearest tenth.

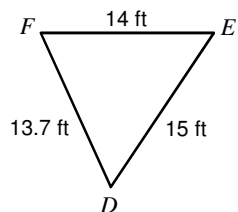
1)



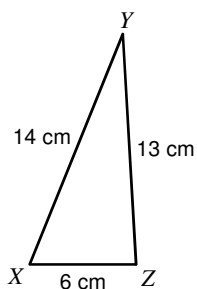
2)



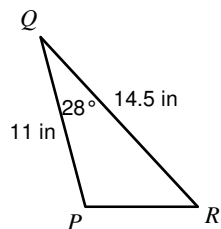
3)



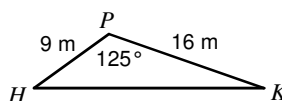
4)



5)



6)



Solve each equation by using the Quadratic Formula.

7) $3v^2 + v - 2 = -4v$

8) $15b^2 - 35b + 15 = 5b^2$

9) $-2n^2 - 10n + 8 = -5n^2$

10) $12x^2 + 27x + 5 = -1$

Answers to Area of a Triangle

1) 11.3 in^2

5) 37.4 in^2

9) $\left\{\frac{4}{3}, 2\right\}$

2) 15.7 cm^2

6) 59 m^2

10) $\left\{-\frac{1}{4}, -2\right\}$

3) 87.3 ft^2

7) $\left\{\frac{1}{3}, -2\right\}$

4) 38.9 cm^2

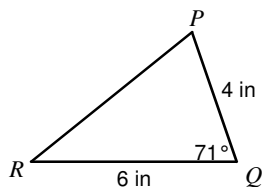
8) $\left\{\frac{1}{2}, 3\right\}$

Area of a Triangle

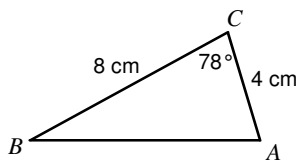
© 2014 Kuta Software LLC. All rights reserved.

Find the area of each triangle to the nearest tenth.

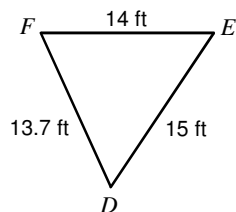
1)



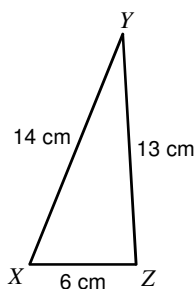
2)



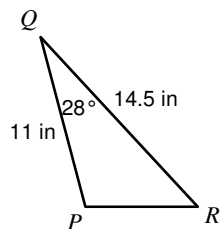
3)



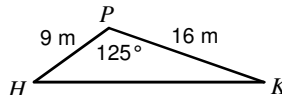
4)



5)



6)



Solve each equation by using the Quadratic Formula.

7) $3v^2 + v - 2 = -4v$

8) $15b^2 - 35b + 15 = 5b^2$

9) $-2n^2 - 10n + 8 = -5n^2$

10) $12x^2 + 27x + 5 = -1$

Answers to Area of a Triangle

1) 11.3 in^2

5) 37.4 in^2

9) $\left\{\frac{4}{3}, 2\right\}$

2) 15.7 cm^2

6) 59 m^2

10) $\left\{-\frac{1}{4}, -2\right\}$

3) 87.3 ft^2

7) $\left\{\frac{1}{3}, -2\right\}$

4) 38.9 cm^2

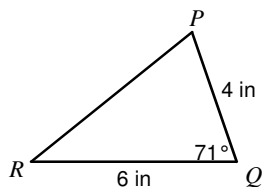
8) $\left\{\frac{1}{2}, 3\right\}$

Area of a Triangle

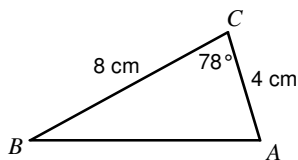
© 2014 Kuta Software LLC. All rights reserved.

Find the area of each triangle to the nearest tenth.

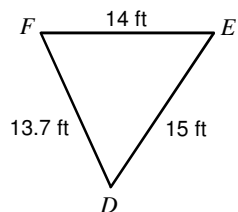
1)



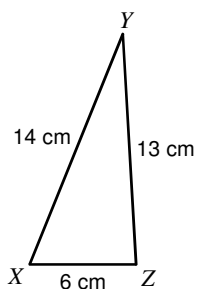
2)



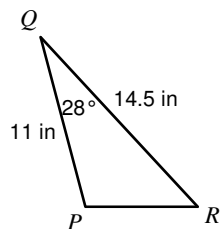
3)



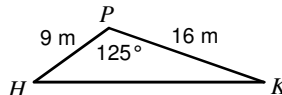
4)



5)



6)



Solve each equation by using the Quadratic Formula.

7) $3v^2 + v - 2 = -4v$

8) $15b^2 - 35b + 15 = 5b^2$

9) $-2n^2 - 10n + 8 = -5n^2$

10) $12x^2 + 27x + 5 = -1$

Answers to Area of a Triangle

1) 11.3 in^2

5) 37.4 in^2

9) $\left\{\frac{4}{3}, 2\right\}$

2) 15.7 cm^2

6) 59 m^2

10) $\left\{-\frac{1}{4}, -2\right\}$

3) 87.3 ft^2

7) $\left\{\frac{1}{3}, -2\right\}$

4) 38.9 cm^2

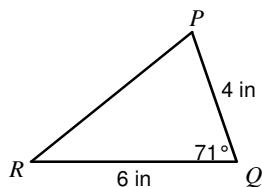
8) $\left\{\frac{1}{2}, 3\right\}$

Area of a Triangle

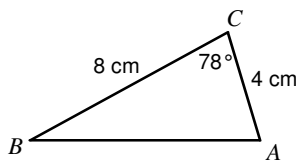
© 2014 Kuta Software LLC. All rights reserved.

Find the area of each triangle to the nearest tenth.

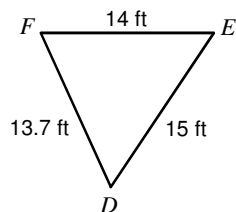
1)



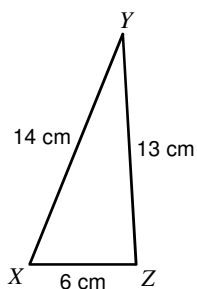
2)



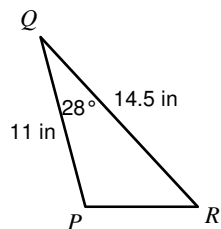
3)



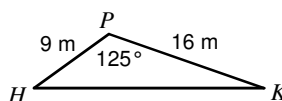
4)



5)



6)



Solve each equation by using the Quadratic Formula.

7) $3v^2 + v - 2 = -4v$

8) $15b^2 - 35b + 15 = 5b^2$

9) $-2n^2 - 10n + 8 = -5n^2$

10) $12x^2 + 27x + 5 = -1$

Answers to Area of a Triangle

1) 11.3 in^2

5) 37.4 in^2

9) $\left\{\frac{4}{3}, 2\right\}$

2) 15.7 cm^2

6) 59 m^2

10) $\left\{-\frac{1}{4}, -2\right\}$

3) 87.3 ft^2

7) $\left\{\frac{1}{3}, -2\right\}$

4) 38.9 cm^2

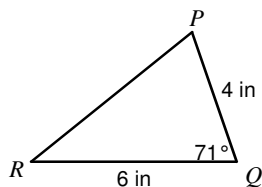
8) $\left\{\frac{1}{2}, 3\right\}$

Area of a Triangle

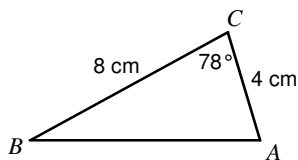
© 2014 Kuta Software LLC. All rights reserved.

Find the area of each triangle to the nearest tenth.

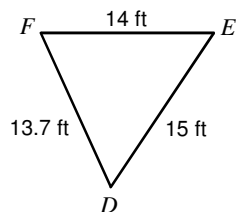
1)



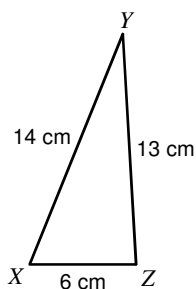
2)



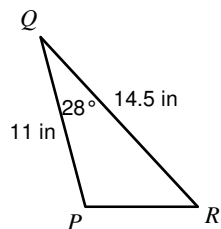
3)



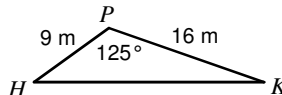
4)



5)



6)



Solve each equation by using the Quadratic Formula.

7) $3v^2 + v - 2 = -4v$

8) $15b^2 - 35b + 15 = 5b^2$

9) $-2n^2 - 10n + 8 = -5n^2$

10) $12x^2 + 27x + 5 = -1$

Answers to Area of a Triangle

1) 11.3 in^2

5) 37.4 in^2

9) $\left\{\frac{4}{3}, 2\right\}$

2) 15.7 cm^2

6) 59 m^2

10) $\left\{-\frac{1}{4}, -2\right\}$

3) 87.3 ft^2

7) $\left\{\frac{1}{3}, -2\right\}$

4) 38.9 cm^2

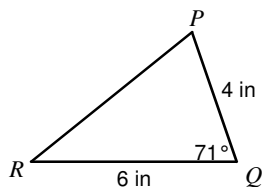
8) $\left\{\frac{1}{2}, 3\right\}$

Area of a Triangle

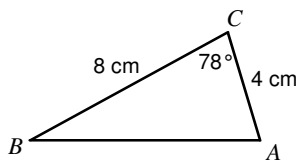
© 2014 Kuta Software LLC. All rights reserved.

Find the area of each triangle to the nearest tenth.

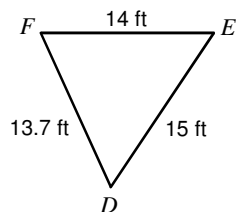
1)



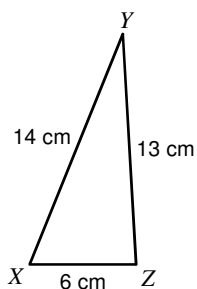
2)



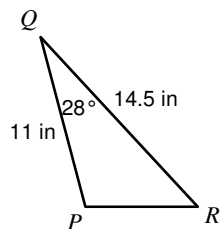
3)



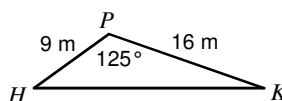
4)



5)



6)



Solve each equation by using the Quadratic Formula.

7) $3v^2 + v - 2 = -4v$

8) $15b^2 - 35b + 15 = 5b^2$

9) $-2n^2 - 10n + 8 = -5n^2$

10) $12x^2 + 27x + 5 = -1$

Answers to Area of a Triangle

1) 11.3 in^2

5) 37.4 in^2

9) $\left\{\frac{4}{3}, 2\right\}$

2) 15.7 cm^2

6) 59 m^2

10) $\left\{-\frac{1}{4}, -2\right\}$

3) 87.3 ft^2

7) $\left\{\frac{1}{3}, -2\right\}$

4) 38.9 cm^2

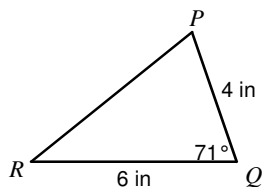
8) $\left\{\frac{1}{2}, 3\right\}$

Area of a Triangle

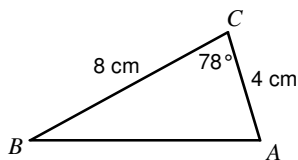
© 2014 Kuta Software LLC. All rights reserved.

Find the area of each triangle to the nearest tenth.

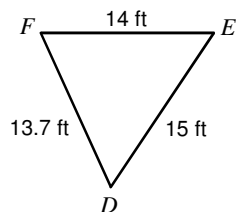
1)



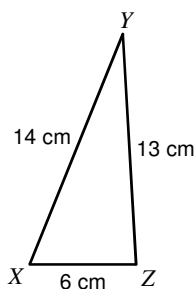
2)



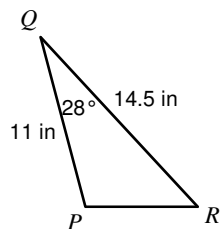
3)



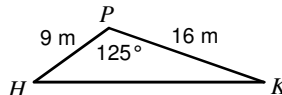
4)



5)



6)



Solve each equation by using the Quadratic Formula.

7) $3v^2 + v - 2 = -4v$

8) $15b^2 - 35b + 15 = 5b^2$

9) $-2n^2 - 10n + 8 = -5n^2$

10) $12x^2 + 27x + 5 = -1$

Answers to Area of a Triangle

1) 11.3 in^2

5) 37.4 in^2

9) $\left\{\frac{4}{3}, 2\right\}$

2) 15.7 cm^2

6) 59 m^2

10) $\left\{-\frac{1}{4}, -2\right\}$

3) 87.3 ft^2

7) $\left\{\frac{1}{3}, -2\right\}$

4) 38.9 cm^2

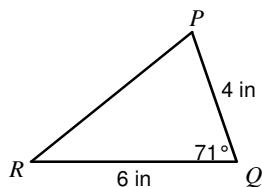
8) $\left\{\frac{1}{2}, 3\right\}$

Area of a Triangle

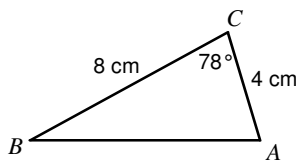
© 2014 Kuta Software LLC. All rights reserved.

Find the area of each triangle to the nearest tenth.

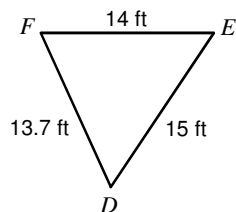
1)



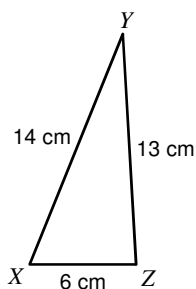
2)



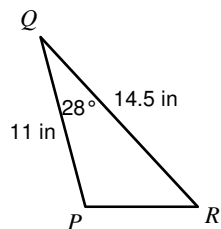
3)



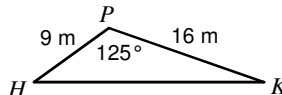
4)



5)



6)



Solve each equation by using the Quadratic Formula.

7) $3v^2 + v - 2 = -4v$

8) $15b^2 - 35b + 15 = 5b^2$

9) $-2n^2 - 10n + 8 = -5n^2$

10) $12x^2 + 27x + 5 = -1$

Answers to Area of a Triangle

1) 11.3 in^2

5) 37.4 in^2

9) $\left\{\frac{4}{3}, 2\right\}$

2) 15.7 cm^2

6) 59 m^2

10) $\left\{-\frac{1}{4}, -2\right\}$

3) 87.3 ft^2

7) $\left\{\frac{1}{3}, -2\right\}$

4) 38.9 cm^2

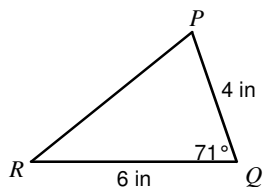
8) $\left\{\frac{1}{2}, 3\right\}$

Area of a Triangle

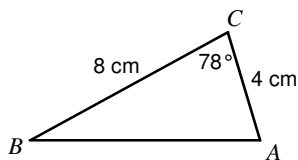
© 2014 Kuta Software LLC. All rights reserved.

Find the area of each triangle to the nearest tenth.

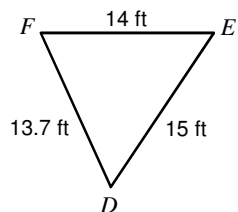
1)



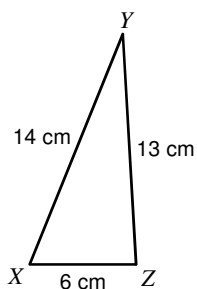
2)



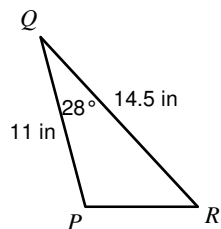
3)



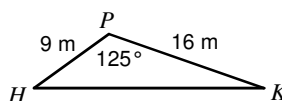
4)



5)



6)



Solve each equation by using the Quadratic Formula.

7) $3v^2 + v - 2 = -4v$

8) $15b^2 - 35b + 15 = 5b^2$

9) $-2n^2 - 10n + 8 = -5n^2$

10) $12x^2 + 27x + 5 = -1$

Answers to Area of a Triangle

1) 11.3 in^2

5) 37.4 in^2

9) $\left\{\frac{4}{3}, 2\right\}$

2) 15.7 cm^2

6) 59 m^2

10) $\left\{-\frac{1}{4}, -2\right\}$

3) 87.3 ft^2

7) $\left\{\frac{1}{3}, -2\right\}$

4) 38.9 cm^2

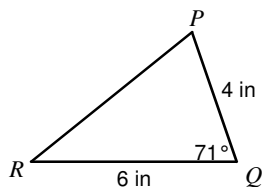
8) $\left\{\frac{1}{2}, 3\right\}$

Area of a Triangle

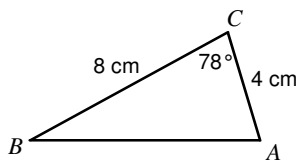
© 2014 Kuta Software LLC. All rights reserved.

Find the area of each triangle to the nearest tenth.

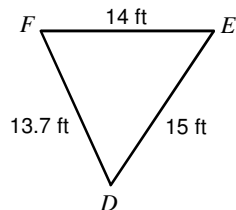
1)



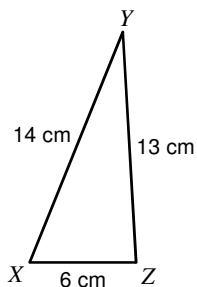
2)



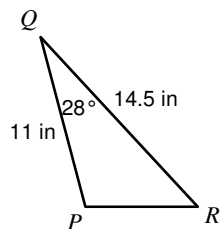
3)



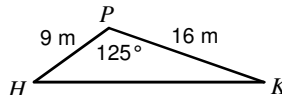
4)



5)



6)



Solve each equation by using the Quadratic Formula.

7) $3v^2 + v - 2 = -4v$

8) $15b^2 - 35b + 15 = 5b^2$

9) $-2n^2 - 10n + 8 = -5n^2$

10) $12x^2 + 27x + 5 = -1$

Answers to Area of a Triangle

1) 11.3 in^2

5) 37.4 in^2

9) $\left\{\frac{4}{3}, 2\right\}$

2) 15.7 cm^2

6) 59 m^2

10) $\left\{-\frac{1}{4}, -2\right\}$

3) 87.3 ft^2

7) $\left\{\frac{1}{3}, -2\right\}$

4) 38.9 cm^2

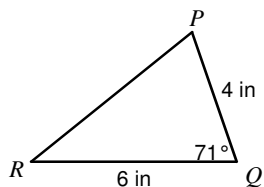
8) $\left\{\frac{1}{2}, 3\right\}$

Area of a Triangle

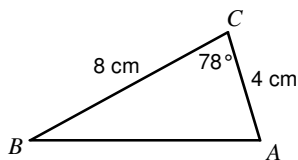
© 2014 Kuta Software LLC. All rights reserved.

Find the area of each triangle to the nearest tenth.

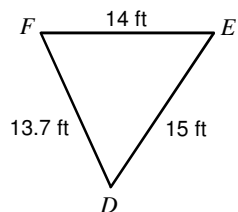
1)



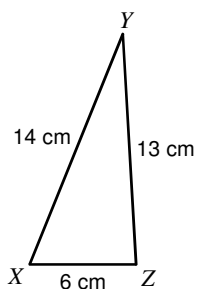
2)



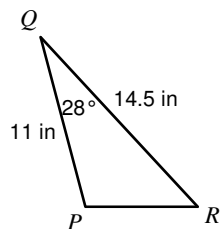
3)



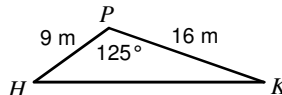
4)



5)



6)



Solve each equation by using the Quadratic Formula.

7) $3v^2 + v - 2 = -4v$

8) $15b^2 - 35b + 15 = 5b^2$

9) $-2n^2 - 10n + 8 = -5n^2$

10) $12x^2 + 27x + 5 = -1$

Answers to Area of a Triangle

1) 11.3 in^2

5) 37.4 in^2

9) $\left\{\frac{4}{3}, 2\right\}$

2) 15.7 cm^2

6) 59 m^2

10) $\left\{-\frac{1}{4}, -2\right\}$

3) 87.3 ft^2

7) $\left\{\frac{1}{3}, -2\right\}$

4) 38.9 cm^2

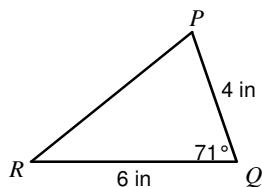
8) $\left\{\frac{1}{2}, 3\right\}$

Area of a Triangle

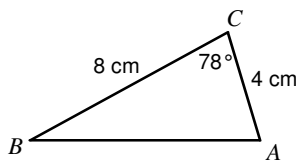
© 2014 Kuta Software LLC. All rights reserved.

Find the area of each triangle to the nearest tenth.

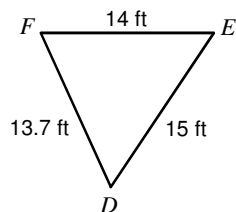
1)



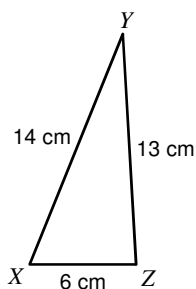
2)



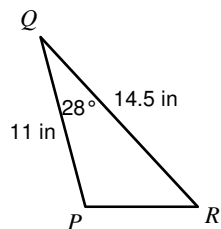
3)



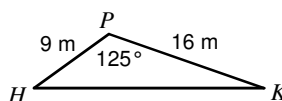
4)



5)



6)



Solve each equation by using the Quadratic Formula.

7) $3v^2 + v - 2 = -4v$

8) $15b^2 - 35b + 15 = 5b^2$

9) $-2n^2 - 10n + 8 = -5n^2$

10) $12x^2 + 27x + 5 = -1$

Answers to Area of a Triangle

1) 11.3 in^2

5) 37.4 in^2

9) $\left\{\frac{4}{3}, 2\right\}$

2) 15.7 cm^2

6) 59 m^2

10) $\left\{-\frac{1}{4}, -2\right\}$

3) 87.3 ft^2

7) $\left\{\frac{1}{3}, -2\right\}$

4) 38.9 cm^2

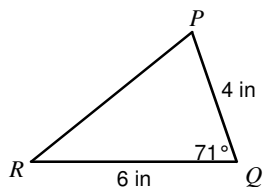
8) $\left\{\frac{1}{2}, 3\right\}$

Area of a Triangle

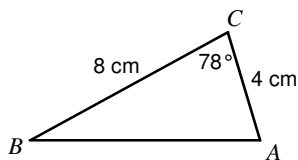
© 2014 Kuta Software LLC. All rights reserved.

Find the area of each triangle to the nearest tenth.

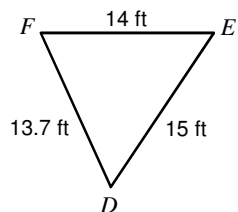
1)



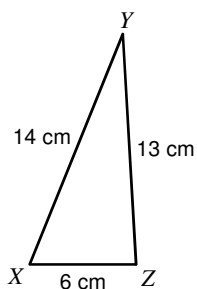
2)



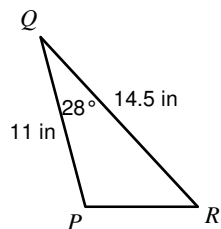
3)



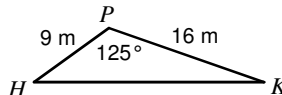
4)



5)



6)



Solve each equation by using the Quadratic Formula.

7) $3v^2 + v - 2 = -4v$

8) $15b^2 - 35b + 15 = 5b^2$

9) $-2n^2 - 10n + 8 = -5n^2$

10) $12x^2 + 27x + 5 = -1$

Answers to Area of a Triangle

1) 11.3 in^2

5) 37.4 in^2

9) $\left\{\frac{4}{3}, 2\right\}$

2) 15.7 cm^2

6) 59 m^2

10) $\left\{-\frac{1}{4}, -2\right\}$

3) 87.3 ft^2

7) $\left\{\frac{1}{3}, -2\right\}$

4) 38.9 cm^2

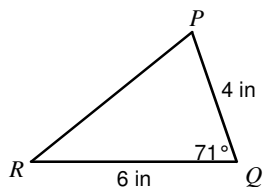
8) $\left\{\frac{1}{2}, 3\right\}$

Area of a Triangle

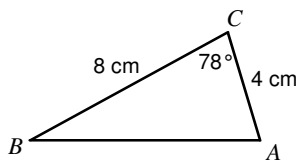
© 2014 Kuta Software LLC. All rights reserved.

Find the area of each triangle to the nearest tenth.

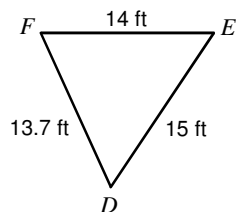
1)



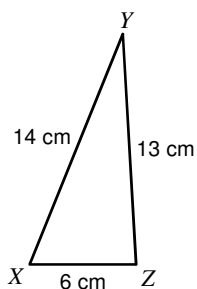
2)



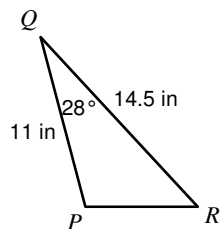
3)



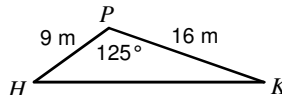
4)



5)



6)



Solve each equation by using the Quadratic Formula.

7) $3v^2 + v - 2 = -4v$

8) $15b^2 - 35b + 15 = 5b^2$

9) $-2n^2 - 10n + 8 = -5n^2$

10) $12x^2 + 27x + 5 = -1$

Answers to Area of a Triangle

1) 11.3 in^2

5) 37.4 in^2

9) $\left\{\frac{4}{3}, 2\right\}$

2) 15.7 cm^2

6) 59 m^2

10) $\left\{-\frac{1}{4}, -2\right\}$

3) 87.3 ft^2

7) $\left\{\frac{1}{3}, -2\right\}$

4) 38.9 cm^2

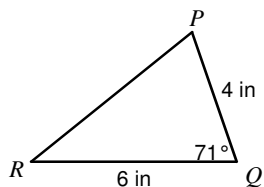
8) $\left\{\frac{1}{2}, 3\right\}$

Area of a Triangle

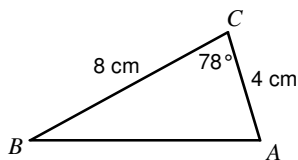
© 2014 Kuta Software LLC. All rights reserved.

Find the area of each triangle to the nearest tenth.

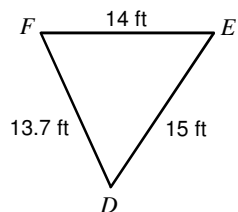
1)



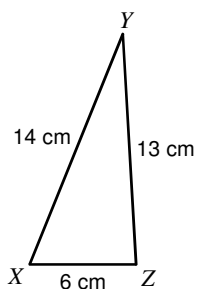
2)



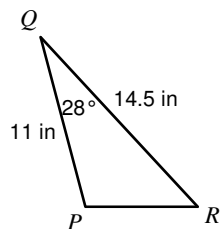
3)



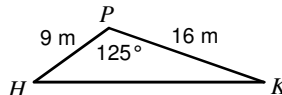
4)



5)



6)



Solve each equation by using the Quadratic Formula.

7) $3v^2 + v - 2 = -4v$

8) $15b^2 - 35b + 15 = 5b^2$

9) $-2n^2 - 10n + 8 = -5n^2$

10) $12x^2 + 27x + 5 = -1$

Answers to Area of a Triangle

1) 11.3 in^2

5) 37.4 in^2

9) $\left\{\frac{4}{3}, 2\right\}$

2) 15.7 cm^2

6) 59 m^2

10) $\left\{-\frac{1}{4}, -2\right\}$

3) 87.3 ft^2

7) $\left\{\frac{1}{3}, -2\right\}$

4) 38.9 cm^2

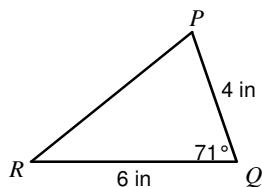
8) $\left\{\frac{1}{2}, 3\right\}$

Area of a Triangle

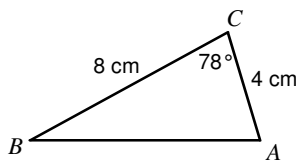
© 2014 Kuta Software LLC. All rights reserved.

Find the area of each triangle to the nearest tenth.

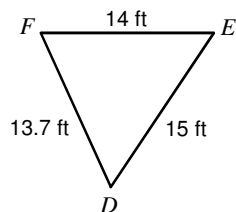
1)



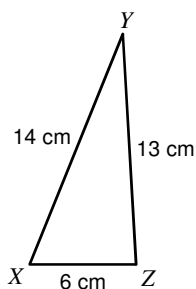
2)



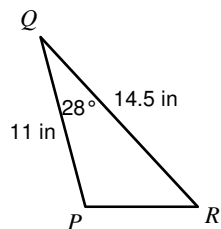
3)



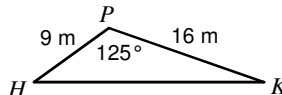
4)



5)



6)



Solve each equation by using the Quadratic Formula.

7) $3v^2 + v - 2 = -4v$

8) $15b^2 - 35b + 15 = 5b^2$

9) $-2n^2 - 10n + 8 = -5n^2$

10) $12x^2 + 27x + 5 = -1$

Answers to Area of a Triangle

1) 11.3 in^2

5) 37.4 in^2

9) $\left\{\frac{4}{3}, 2\right\}$

2) 15.7 cm^2

6) 59 m^2

10) $\left\{-\frac{1}{4}, -2\right\}$

3) 87.3 ft^2

7) $\left\{\frac{1}{3}, -2\right\}$

4) 38.9 cm^2

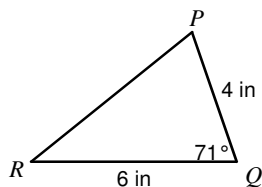
8) $\left\{\frac{1}{2}, 3\right\}$

Area of a Triangle

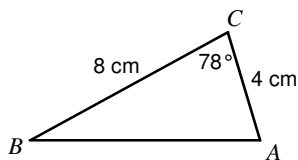
© 2014 Kuta Software LLC. All rights reserved.

Find the area of each triangle to the nearest tenth.

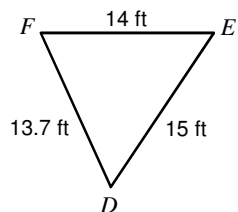
1)



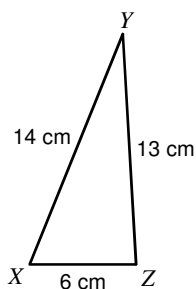
2)



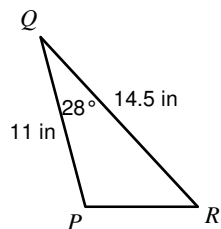
3)



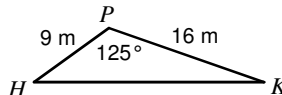
4)



5)



6)



Solve each equation by using the Quadratic Formula.

7) $3v^2 + v - 2 = -4v$

8) $15b^2 - 35b + 15 = 5b^2$

9) $-2n^2 - 10n + 8 = -5n^2$

10) $12x^2 + 27x + 5 = -1$

Answers to Area of a Triangle

1) 11.3 in^2

5) 37.4 in^2

9) $\left\{\frac{4}{3}, 2\right\}$

2) 15.7 cm^2

6) 59 m^2

10) $\left\{-\frac{1}{4}, -2\right\}$

3) 87.3 ft^2

7) $\left\{\frac{1}{3}, -2\right\}$

4) 38.9 cm^2

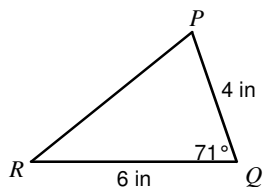
8) $\left\{\frac{1}{2}, 3\right\}$

Area of a Triangle

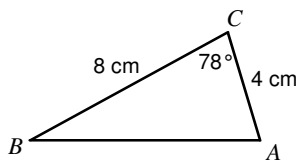
© 2014 Kuta Software LLC. All rights reserved.

Find the area of each triangle to the nearest tenth.

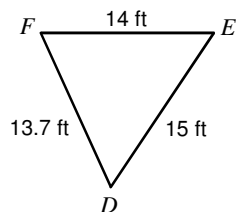
1)



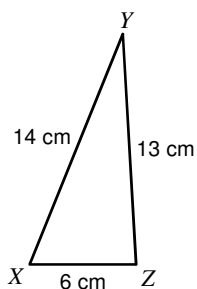
2)



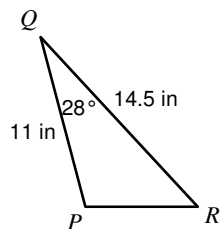
3)



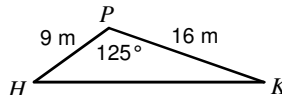
4)



5)



6)



Solve each equation by using the Quadratic Formula.

7) $3v^2 + v - 2 = -4v$

8) $15b^2 - 35b + 15 = 5b^2$

9) $-2n^2 - 10n + 8 = -5n^2$

10) $12x^2 + 27x + 5 = -1$

Answers to Area of a Triangle

1) 11.3 in^2

5) 37.4 in^2

9) $\left\{\frac{4}{3}, 2\right\}$

2) 15.7 cm^2

6) 59 m^2

10) $\left\{-\frac{1}{4}, -2\right\}$

3) 87.3 ft^2

7) $\left\{\frac{1}{3}, -2\right\}$

4) 38.9 cm^2

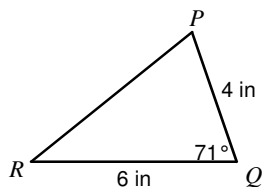
8) $\left\{\frac{1}{2}, 3\right\}$

Area of a Triangle

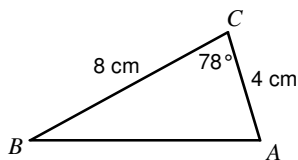
© 2014 Kuta Software LLC. All rights reserved.

Find the area of each triangle to the nearest tenth.

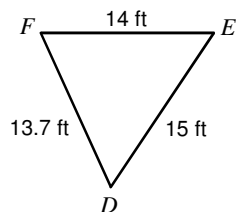
1)



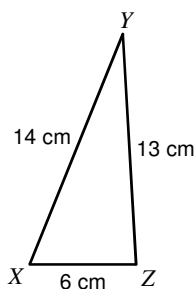
2)



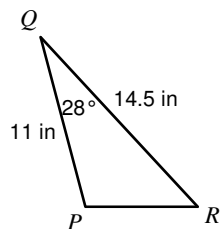
3)



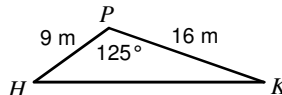
4)



5)



6)



Solve each equation by using the Quadratic Formula.

7) $3v^2 + v - 2 = -4v$

8) $15b^2 - 35b + 15 = 5b^2$

9) $-2n^2 - 10n + 8 = -5n^2$

10) $12x^2 + 27x + 5 = -1$

Answers to Area of a Triangle

1) 11.3 in^2

5) 37.4 in^2

9) $\left\{\frac{4}{3}, 2\right\}$

2) 15.7 cm^2

6) 59 m^2

10) $\left\{-\frac{1}{4}, -2\right\}$

3) 87.3 ft^2

7) $\left\{\frac{1}{3}, -2\right\}$

4) 38.9 cm^2

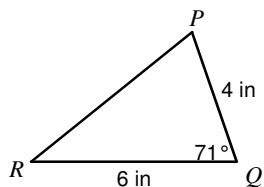
8) $\left\{\frac{1}{2}, 3\right\}$

Area of a Triangle

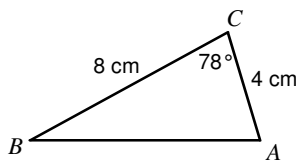
© 2014 Kuta Software LLC. All rights reserved.

Find the area of each triangle to the nearest tenth.

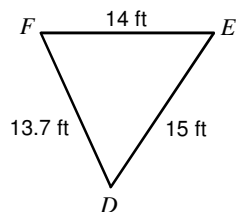
1)



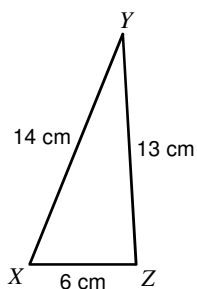
2)



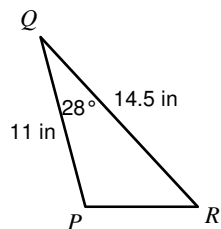
3)



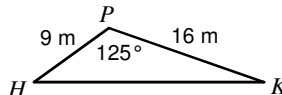
4)



5)



6)



Solve each equation by using the Quadratic Formula.

7) $3v^2 + v - 2 = -4v$

8) $15b^2 - 35b + 15 = 5b^2$

9) $-2n^2 - 10n + 8 = -5n^2$

10) $12x^2 + 27x + 5 = -1$

Answers to Area of a Triangle

1) 11.3 in^2

5) 37.4 in^2

9) $\left\{\frac{4}{3}, 2\right\}$

2) 15.7 cm^2

6) 59 m^2

10) $\left\{-\frac{1}{4}, -2\right\}$

3) 87.3 ft^2

7) $\left\{\frac{1}{3}, -2\right\}$

4) 38.9 cm^2

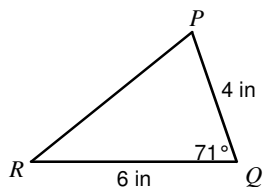
8) $\left\{\frac{1}{2}, 3\right\}$

Area of a Triangle

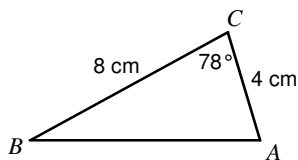
© 2014 Kuta Software LLC. All rights reserved.

Find the area of each triangle to the nearest tenth.

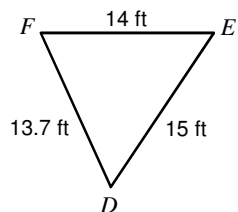
1)



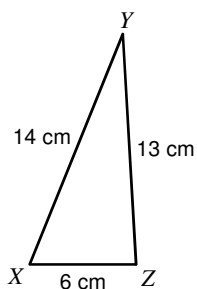
2)



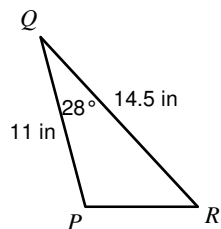
3)



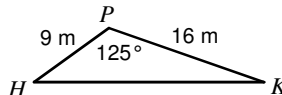
4)



5)



6)



Solve each equation by using the Quadratic Formula.

7) $3v^2 + v - 2 = -4v$

8) $15b^2 - 35b + 15 = 5b^2$

9) $-2n^2 - 10n + 8 = -5n^2$

10) $12x^2 + 27x + 5 = -1$

Answers to Area of a Triangle

1) 11.3 in^2

5) 37.4 in^2

9) $\left\{\frac{4}{3}, 2\right\}$

2) 15.7 cm^2

6) 59 m^2

10) $\left\{-\frac{1}{4}, -2\right\}$

3) 87.3 ft^2

7) $\left\{\frac{1}{3}, -2\right\}$

4) 38.9 cm^2

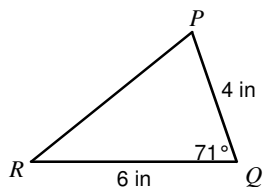
8) $\left\{\frac{1}{2}, 3\right\}$

Area of a Triangle

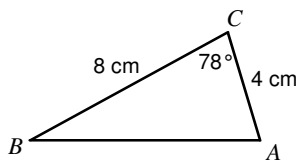
© 2014 Kuta Software LLC. All rights reserved.

Find the area of each triangle to the nearest tenth.

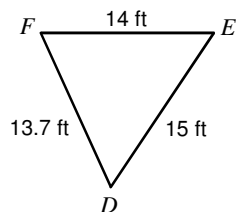
1)



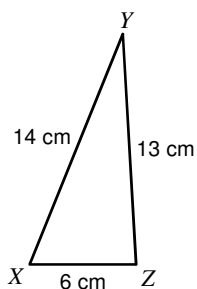
2)



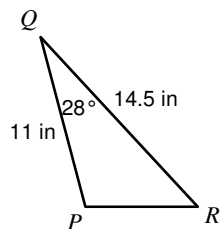
3)



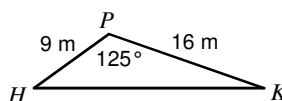
4)



5)



6)



Solve each equation by using the Quadratic Formula.

7) $3v^2 + v - 2 = -4v$

8) $15b^2 - 35b + 15 = 5b^2$

9) $-2n^2 - 10n + 8 = -5n^2$

10) $12x^2 + 27x + 5 = -1$

Answers to Area of a Triangle

1) 11.3 in^2

5) 37.4 in^2

9) $\left\{\frac{4}{3}, 2\right\}$

2) 15.7 cm^2

6) 59 m^2

10) $\left\{-\frac{1}{4}, -2\right\}$

3) 87.3 ft^2

7) $\left\{\frac{1}{3}, -2\right\}$

4) 38.9 cm^2

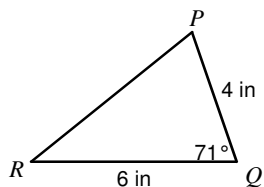
8) $\left\{\frac{1}{2}, 3\right\}$

Area of a Triangle

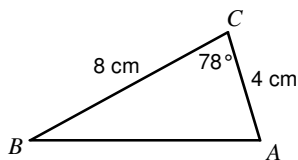
© 2014 Kuta Software LLC. All rights reserved.

Find the area of each triangle to the nearest tenth.

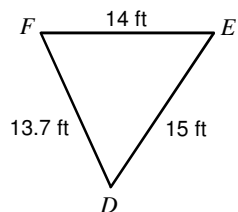
1)



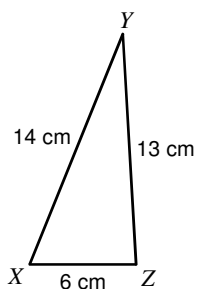
2)



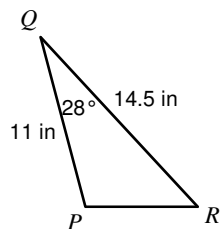
3)



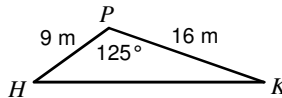
4)



5)



6)



Solve each equation by using the Quadratic Formula.

7) $3v^2 + v - 2 = -4v$

8) $15b^2 - 35b + 15 = 5b^2$

9) $-2n^2 - 10n + 8 = -5n^2$

10) $12x^2 + 27x + 5 = -1$

Answers to Area of a Triangle

1) 11.3 in^2

5) 37.4 in^2

9) $\left\{\frac{4}{3}, 2\right\}$

2) 15.7 cm^2

6) 59 m^2

10) $\left\{-\frac{1}{4}, -2\right\}$

3) 87.3 ft^2

7) $\left\{\frac{1}{3}, -2\right\}$

4) 38.9 cm^2

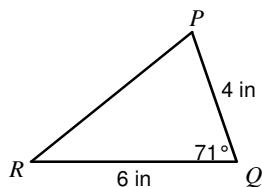
8) $\left\{\frac{1}{2}, 3\right\}$

Area of a Triangle

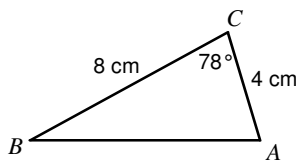
© 2014 Kuta Software LLC. All rights reserved.

Find the area of each triangle to the nearest tenth.

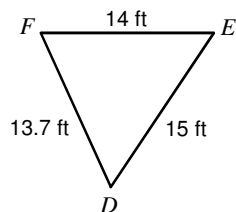
1)



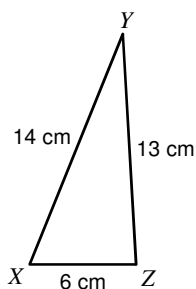
2)



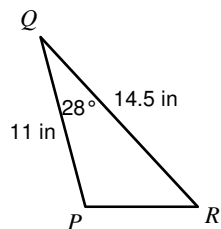
3)



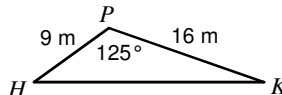
4)



5)



6)



Solve each equation by using the Quadratic Formula.

7) $3v^2 + v - 2 = -4v$

8) $15b^2 - 35b + 15 = 5b^2$

9) $-2n^2 - 10n + 8 = -5n^2$

10) $12x^2 + 27x + 5 = -1$

Answers to Area of a Triangle

1) 11.3 in^2

5) 37.4 in^2

9) $\left\{\frac{4}{3}, 2\right\}$

2) 15.7 cm^2

6) 59 m^2

10) $\left\{-\frac{1}{4}, -2\right\}$

3) 87.3 ft^2

7) $\left\{\frac{1}{3}, -2\right\}$

4) 38.9 cm^2

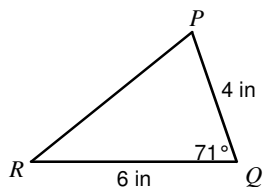
8) $\left\{\frac{1}{2}, 3\right\}$

Area of a Triangle

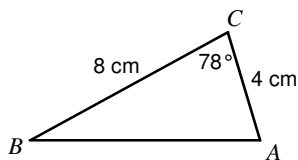
© 2014 Kuta Software LLC. All rights reserved.

Find the area of each triangle to the nearest tenth.

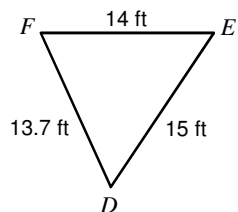
1)



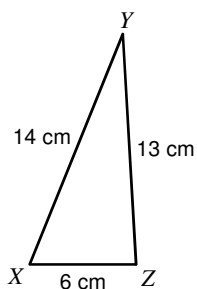
2)



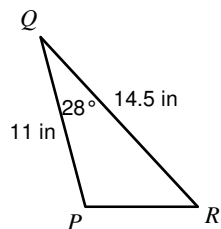
3)



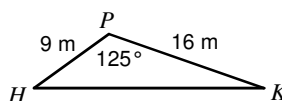
4)



5)



6)



Solve each equation by using the Quadratic Formula.

7) $3v^2 + v - 2 = -4v$

8) $15b^2 - 35b + 15 = 5b^2$

9) $-2n^2 - 10n + 8 = -5n^2$

10) $12x^2 + 27x + 5 = -1$

Answers to Area of a Triangle

1) 11.3 in^2

5) 37.4 in^2

9) $\left\{\frac{4}{3}, 2\right\}$

2) 15.7 cm^2

6) 59 m^2

10) $\left\{-\frac{1}{4}, -2\right\}$

3) 87.3 ft^2

7) $\left\{\frac{1}{3}, -2\right\}$

4) 38.9 cm^2

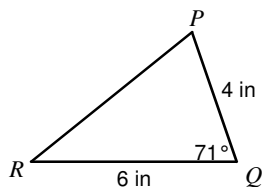
8) $\left\{\frac{1}{2}, 3\right\}$

Area of a Triangle

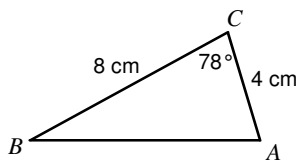
© 2014 Kuta Software LLC. All rights reserved.

Find the area of each triangle to the nearest tenth.

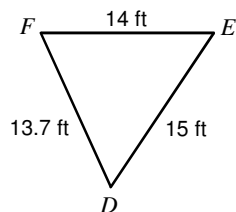
1)



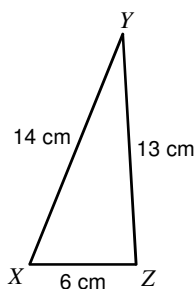
2)



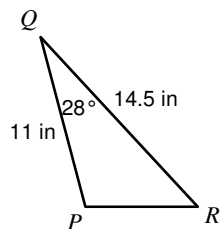
3)



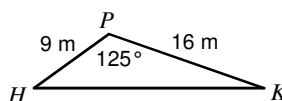
4)



5)



6)



Solve each equation by using the Quadratic Formula.

7) $3v^2 + v - 2 = -4v$

8) $15b^2 - 35b + 15 = 5b^2$

9) $-2n^2 - 10n + 8 = -5n^2$

10) $12x^2 + 27x + 5 = -1$

Answers to Area of a Triangle

1) 11.3 in^2

5) 37.4 in^2

9) $\left\{\frac{4}{3}, 2\right\}$

2) 15.7 cm^2

6) 59 m^2

10) $\left\{-\frac{1}{4}, -2\right\}$

3) 87.3 ft^2

7) $\left\{\frac{1}{3}, -2\right\}$

4) 38.9 cm^2

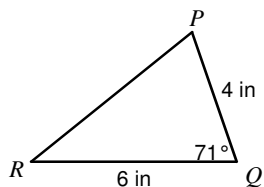
8) $\left\{\frac{1}{2}, 3\right\}$

Area of a Triangle

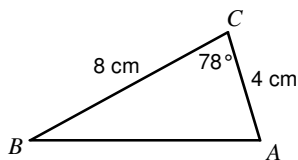
© 2014 Kuta Software LLC. All rights reserved.

Find the area of each triangle to the nearest tenth.

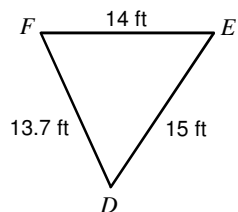
1)



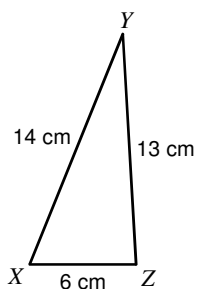
2)



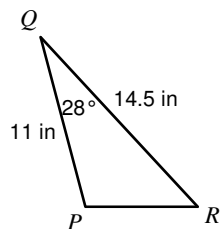
3)



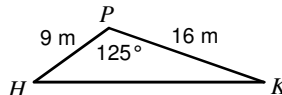
4)



5)



6)



Solve each equation by using the Quadratic Formula.

7) $3v^2 + v - 2 = -4v$

8) $15b^2 - 35b + 15 = 5b^2$

9) $-2n^2 - 10n + 8 = -5n^2$

10) $12x^2 + 27x + 5 = -1$

Answers to Area of a Triangle

1) 11.3 in^2

5) 37.4 in^2

9) $\left\{\frac{4}{3}, 2\right\}$

2) 15.7 cm^2

6) 59 m^2

10) $\left\{-\frac{1}{4}, -2\right\}$

3) 87.3 ft^2

7) $\left\{\frac{1}{3}, -2\right\}$

4) 38.9 cm^2

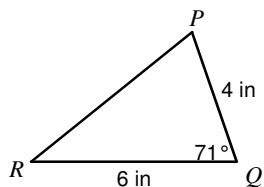
8) $\left\{\frac{1}{2}, 3\right\}$

Area of a Triangle

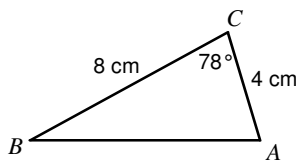
© 2014 Kuta Software LLC. All rights reserved.

Find the area of each triangle to the nearest tenth.

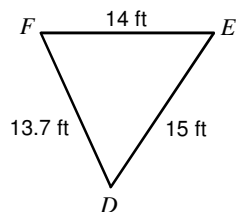
1)



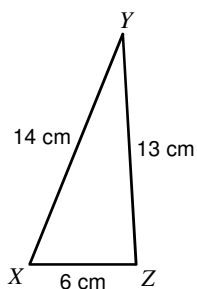
2)



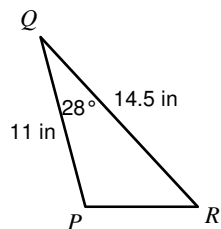
3)



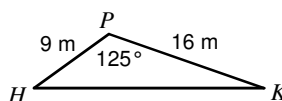
4)



5)



6)



Solve each equation by using the Quadratic Formula.

7) $3v^2 + v - 2 = -4v$

8) $15b^2 - 35b + 15 = 5b^2$

9) $-2n^2 - 10n + 8 = -5n^2$

10) $12x^2 + 27x + 5 = -1$

Answers to Area of a Triangle

1) 11.3 in^2

5) 37.4 in^2

9) $\left\{\frac{4}{3}, 2\right\}$

2) 15.7 cm^2

6) 59 m^2

10) $\left\{-\frac{1}{4}, -2\right\}$

3) 87.3 ft^2

7) $\left\{\frac{1}{3}, -2\right\}$

4) 38.9 cm^2

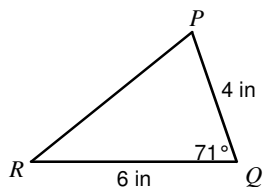
8) $\left\{\frac{1}{2}, 3\right\}$

Area of a Triangle

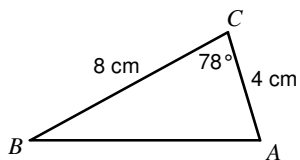
© 2014 Kuta Software LLC. All rights reserved.

Find the area of each triangle to the nearest tenth.

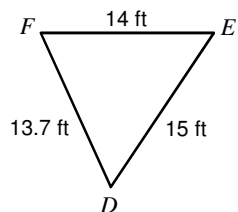
1)



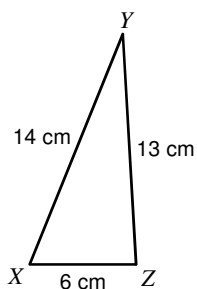
2)



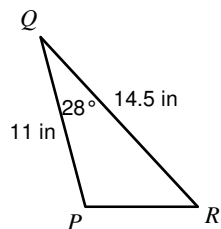
3)



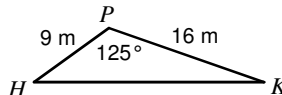
4)



5)



6)



Solve each equation by using the Quadratic Formula.

7) $3v^2 + v - 2 = -4v$

8) $15b^2 - 35b + 15 = 5b^2$

9) $-2n^2 - 10n + 8 = -5n^2$

10) $12x^2 + 27x + 5 = -1$

Answers to Area of a Triangle

1) 11.3 in^2

5) 37.4 in^2

9) $\left\{\frac{4}{3}, 2\right\}$

2) 15.7 cm^2

6) 59 m^2

10) $\left\{-\frac{1}{4}, -2\right\}$

3) 87.3 ft^2

7) $\left\{\frac{1}{3}, -2\right\}$

4) 38.9 cm^2

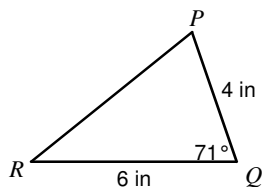
8) $\left\{\frac{1}{2}, 3\right\}$

Area of a Triangle

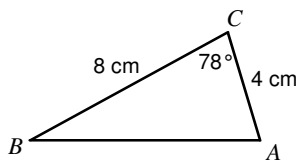
© 2014 Kuta Software LLC. All rights reserved.

Find the area of each triangle to the nearest tenth.

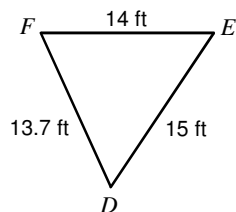
1)



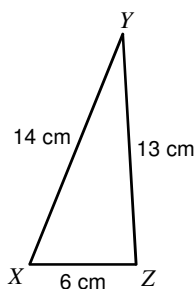
2)



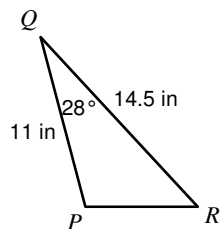
3)



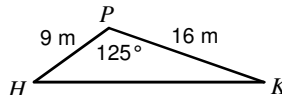
4)



5)



6)



Solve each equation by using the Quadratic Formula.

7) $3v^2 + v - 2 = -4v$

8) $15b^2 - 35b + 15 = 5b^2$

9) $-2n^2 - 10n + 8 = -5n^2$

10) $12x^2 + 27x + 5 = -1$

Answers to Area of a Triangle

1) 11.3 in^2

5) 37.4 in^2

9) $\left\{\frac{4}{3}, 2\right\}$

2) 15.7 cm^2

6) 59 m^2

10) $\left\{-\frac{1}{4}, -2\right\}$

3) 87.3 ft^2

7) $\left\{\frac{1}{3}, -2\right\}$

4) 38.9 cm^2

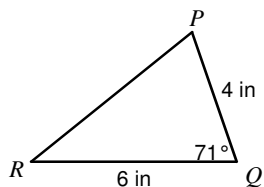
8) $\left\{\frac{1}{2}, 3\right\}$

Area of a Triangle

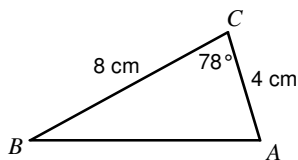
© 2014 Kuta Software LLC. All rights reserved.

Find the area of each triangle to the nearest tenth.

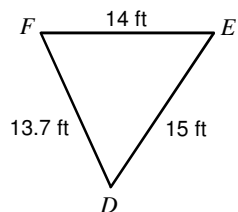
1)



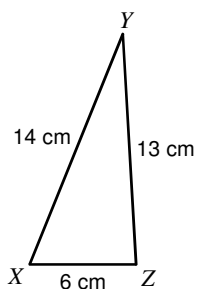
2)



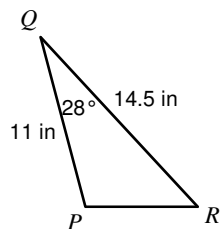
3)



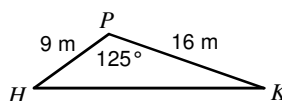
4)



5)



6)



Solve each equation by using the Quadratic Formula.

7) $3v^2 + v - 2 = -4v$

8) $15b^2 - 35b + 15 = 5b^2$

9) $-2n^2 - 10n + 8 = -5n^2$

10) $12x^2 + 27x + 5 = -1$

Answers to Area of a Triangle

1) 11.3 in^2

5) 37.4 in^2

9) $\left\{\frac{4}{3}, 2\right\}$

2) 15.7 cm^2

6) 59 m^2

10) $\left\{-\frac{1}{4}, -2\right\}$

3) 87.3 ft^2

7) $\left\{\frac{1}{3}, -2\right\}$

4) 38.9 cm^2

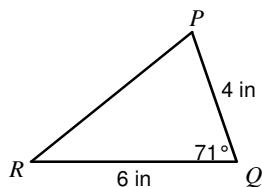
8) $\left\{\frac{1}{2}, 3\right\}$

Area of a Triangle

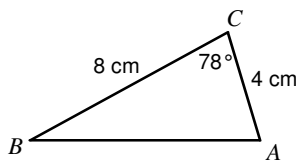
© 2014 Kuta Software LLC. All rights reserved.

Find the area of each triangle to the nearest tenth.

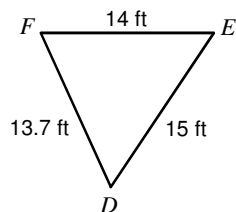
1)



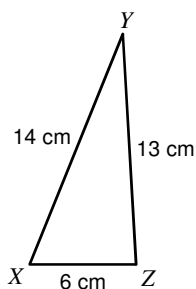
2)



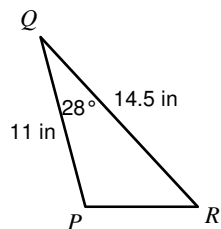
3)



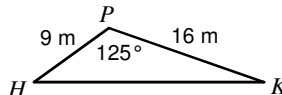
4)



5)



6)



Solve each equation by using the Quadratic Formula.

7) $3v^2 + v - 2 = -4v$

8) $15b^2 - 35b + 15 = 5b^2$

9) $-2n^2 - 10n + 8 = -5n^2$

10) $12x^2 + 27x + 5 = -1$

Answers to Area of a Triangle

1) 11.3 in^2

5) 37.4 in^2

9) $\left\{\frac{4}{3}, 2\right\}$

2) 15.7 cm^2

6) 59 m^2

10) $\left\{-\frac{1}{4}, -2\right\}$

3) 87.3 ft^2

7) $\left\{\frac{1}{3}, -2\right\}$

4) 38.9 cm^2

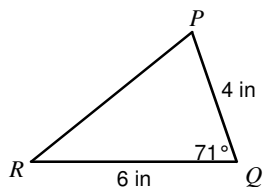
8) $\left\{\frac{1}{2}, 3\right\}$

Area of a Triangle

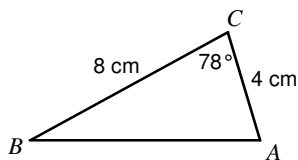
© 2014 Kuta Software LLC. All rights reserved.

Find the area of each triangle to the nearest tenth.

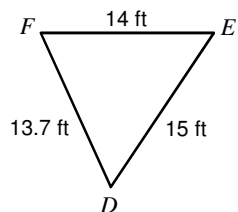
1)



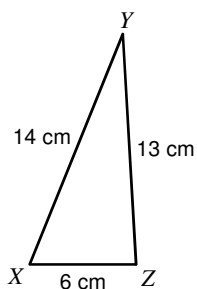
2)



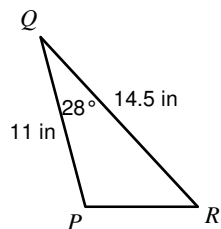
3)



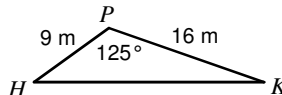
4)



5)



6)



Solve each equation by using the Quadratic Formula.

7) $3v^2 + v - 2 = -4v$

8) $15b^2 - 35b + 15 = 5b^2$

9) $-2n^2 - 10n + 8 = -5n^2$

10) $12x^2 + 27x + 5 = -1$

Answers to Area of a Triangle

1) 11.3 in^2

5) 37.4 in^2

9) $\left\{\frac{4}{3}, 2\right\}$

2) 15.7 cm^2

6) 59 m^2

10) $\left\{-\frac{1}{4}, -2\right\}$

3) 87.3 ft^2

7) $\left\{\frac{1}{3}, -2\right\}$

4) 38.9 cm^2

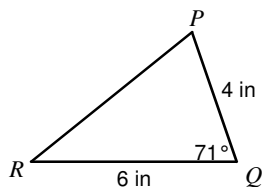
8) $\left\{\frac{1}{2}, 3\right\}$

Area of a Triangle

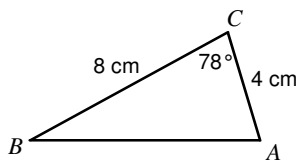
© 2014 Kuta Software LLC. All rights reserved.

Find the area of each triangle to the nearest tenth.

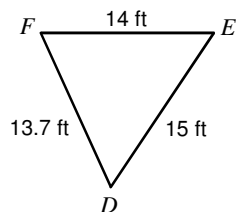
1)



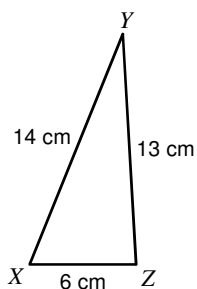
2)



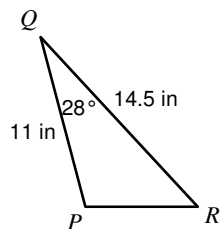
3)



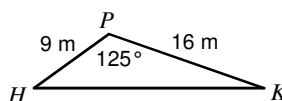
4)



5)



6)



Solve each equation by using the Quadratic Formula.

7) $3v^2 + v - 2 = -4v$

8) $15b^2 - 35b + 15 = 5b^2$

9) $-2n^2 - 10n + 8 = -5n^2$

10) $12x^2 + 27x + 5 = -1$

Answers to Area of a Triangle

1) 11.3 in^2

5) 37.4 in^2

9) $\left\{\frac{4}{3}, 2\right\}$

2) 15.7 cm^2

6) 59 m^2

10) $\left\{-\frac{1}{4}, -2\right\}$

3) 87.3 ft^2

7) $\left\{\frac{1}{3}, -2\right\}$

4) 38.9 cm^2

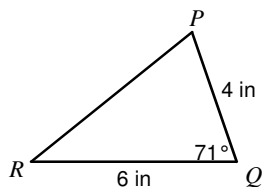
8) $\left\{\frac{1}{2}, 3\right\}$

Area of a Triangle

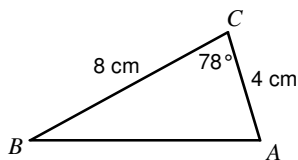
© 2014 Kuta Software LLC. All rights reserved.

Find the area of each triangle to the nearest tenth.

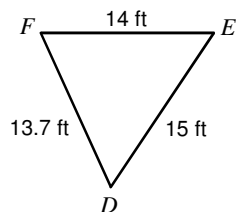
1)



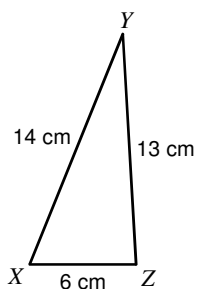
2)



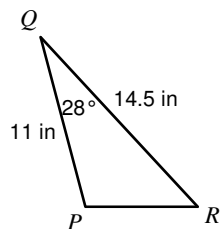
3)



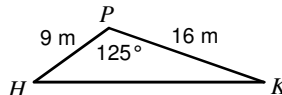
4)



5)



6)



Solve each equation by using the Quadratic Formula.

7) $3v^2 + v - 2 = -4v$

8) $15b^2 - 35b + 15 = 5b^2$

9) $-2n^2 - 10n + 8 = -5n^2$

10) $12x^2 + 27x + 5 = -1$

Answers to Area of a Triangle

1) 11.3 in^2

5) 37.4 in^2

9) $\left\{\frac{4}{3}, 2\right\}$

2) 15.7 cm^2

6) 59 m^2

10) $\left\{-\frac{1}{4}, -2\right\}$

3) 87.3 ft^2

7) $\left\{\frac{1}{3}, -2\right\}$

4) 38.9 cm^2

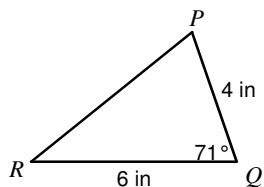
8) $\left\{\frac{1}{2}, 3\right\}$

Area of a Triangle

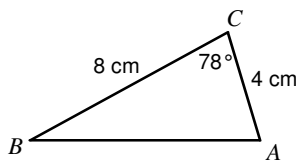
© 2014 Kuta Software LLC. All rights reserved.

Find the area of each triangle to the nearest tenth.

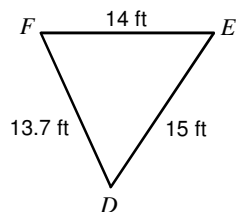
1)



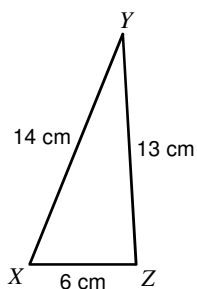
2)



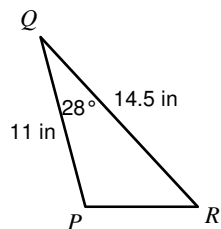
3)



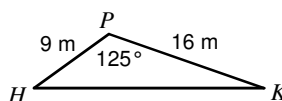
4)



5)



6)



Solve each equation by using the Quadratic Formula.

7) $3v^2 + v - 2 = -4v$

8) $15b^2 - 35b + 15 = 5b^2$

9) $-2n^2 - 10n + 8 = -5n^2$

10) $12x^2 + 27x + 5 = -1$

Answers to Area of a Triangle

1) 11.3 in^2

5) 37.4 in^2

9) $\left\{\frac{4}{3}, 2\right\}$

2) 15.7 cm^2

6) 59 m^2

10) $\left\{-\frac{1}{4}, -2\right\}$

3) 87.3 ft^2

7) $\left\{\frac{1}{3}, -2\right\}$

4) 38.9 cm^2

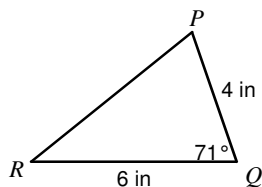
8) $\left\{\frac{1}{2}, 3\right\}$

Area of a Triangle

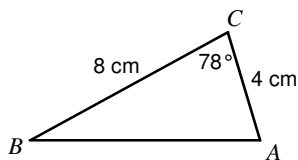
© 2014 Kuta Software LLC. All rights reserved.

Find the area of each triangle to the nearest tenth.

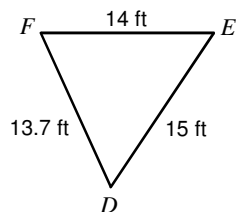
1)



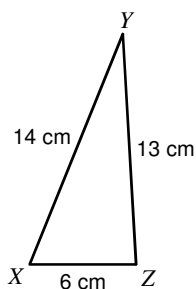
2)



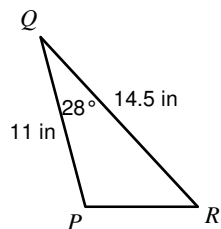
3)



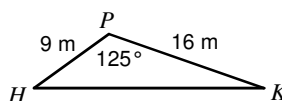
4)



5)



6)



Solve each equation by using the Quadratic Formula.

7) $3v^2 + v - 2 = -4v$

8) $15b^2 - 35b + 15 = 5b^2$

9) $-2n^2 - 10n + 8 = -5n^2$

10) $12x^2 + 27x + 5 = -1$

Answers to Area of a Triangle

1) 11.3 in^2

5) 37.4 in^2

9) $\left\{\frac{4}{3}, 2\right\}$

2) 15.7 cm^2

6) 59 m^2

10) $\left\{-\frac{1}{4}, -2\right\}$

3) 87.3 ft^2

7) $\left\{\frac{1}{3}, -2\right\}$

4) 38.9 cm^2

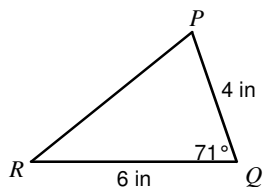
8) $\left\{\frac{1}{2}, 3\right\}$

Area of a Triangle

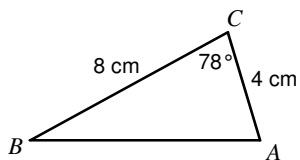
© 2014 Kuta Software LLC. All rights reserved.

Find the area of each triangle to the nearest tenth.

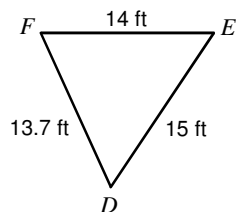
1)



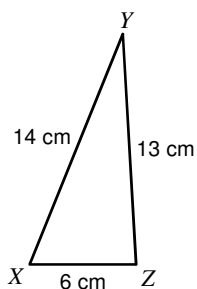
2)



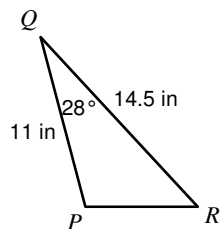
3)



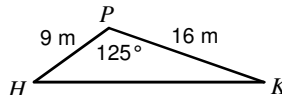
4)



5)



6)



Solve each equation by using the Quadratic Formula.

7) $3v^2 + v - 2 = -4v$

8) $15b^2 - 35b + 15 = 5b^2$

9) $-2n^2 - 10n + 8 = -5n^2$

10) $12x^2 + 27x + 5 = -1$

Answers to Area of a Triangle

1) 11.3 in^2

5) 37.4 in^2

9) $\left\{\frac{4}{3}, 2\right\}$

2) 15.7 cm^2

6) 59 m^2

10) $\left\{-\frac{1}{4}, -2\right\}$

3) 87.3 ft^2

7) $\left\{\frac{1}{3}, -2\right\}$

4) 38.9 cm^2

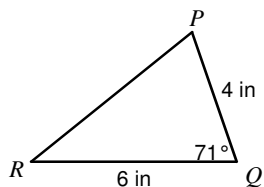
8) $\left\{\frac{1}{2}, 3\right\}$

Area of a Triangle

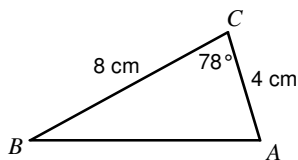
© 2014 Kuta Software LLC. All rights reserved.

Find the area of each triangle to the nearest tenth.

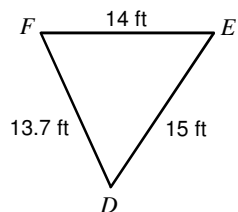
1)



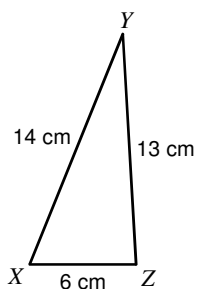
2)



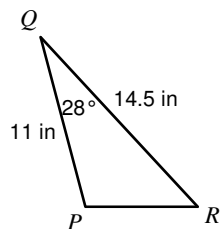
3)



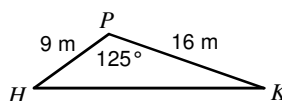
4)



5)



6)



Solve each equation by using the Quadratic Formula.

7) $3v^2 + v - 2 = -4v$

8) $15b^2 - 35b + 15 = 5b^2$

9) $-2n^2 - 10n + 8 = -5n^2$

10) $12x^2 + 27x + 5 = -1$

Answers to Area of a Triangle

1) 11.3 in^2

5) 37.4 in^2

9) $\left\{\frac{4}{3}, 2\right\}$

2) 15.7 cm^2

6) 59 m^2

10) $\left\{-\frac{1}{4}, -2\right\}$

3) 87.3 ft^2

7) $\left\{\frac{1}{3}, -2\right\}$

4) 38.9 cm^2

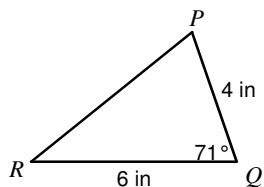
8) $\left\{\frac{1}{2}, 3\right\}$

Area of a Triangle

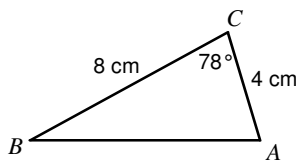
© 2014 Kuta Software LLC. All rights reserved.

Find the area of each triangle to the nearest tenth.

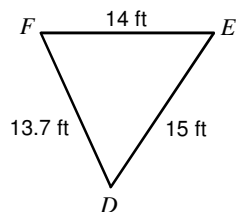
1)



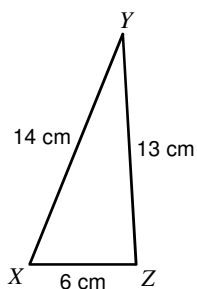
2)



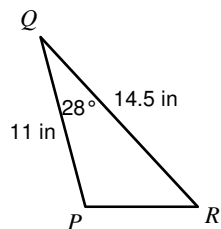
3)



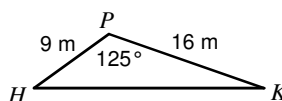
4)



5)



6)



Solve each equation by using the Quadratic Formula.

7) $3v^2 + v - 2 = -4v$

8) $15b^2 - 35b + 15 = 5b^2$

9) $-2n^2 - 10n + 8 = -5n^2$

10) $12x^2 + 27x + 5 = -1$

Answers to Area of a Triangle

1) 11.3 in^2

5) 37.4 in^2

9) $\left\{\frac{4}{3}, 2\right\}$

2) 15.7 cm^2

6) 59 m^2

10) $\left\{-\frac{1}{4}, -2\right\}$

3) 87.3 ft^2

7) $\left\{\frac{1}{3}, -2\right\}$

4) 38.9 cm^2

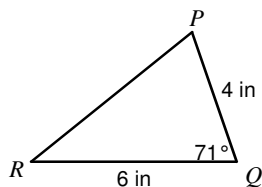
8) $\left\{\frac{1}{2}, 3\right\}$

Area of a Triangle

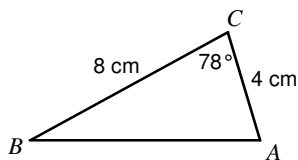
© 2014 Kuta Software LLC. All rights reserved.

Find the area of each triangle to the nearest tenth.

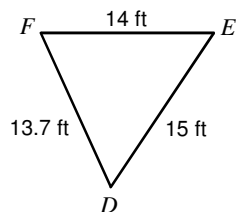
1)



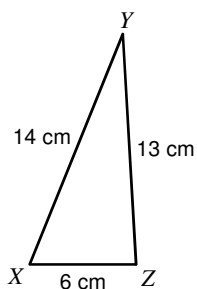
2)



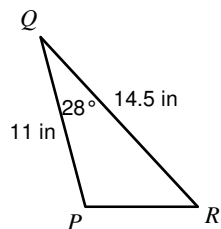
3)



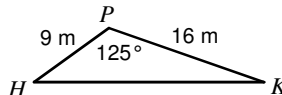
4)



5)



6)



Solve each equation by using the Quadratic Formula.

7) $3v^2 + v - 2 = -4v$

8) $15b^2 - 35b + 15 = 5b^2$

9) $-2n^2 - 10n + 8 = -5n^2$

10) $12x^2 + 27x + 5 = -1$

Answers to Area of a Triangle

1) 11.3 in^2

5) 37.4 in^2

9) $\left\{\frac{4}{3}, 2\right\}$

2) 15.7 cm^2

6) 59 m^2

10) $\left\{-\frac{1}{4}, -2\right\}$

3) 87.3 ft^2

7) $\left\{\frac{1}{3}, -2\right\}$

4) 38.9 cm^2

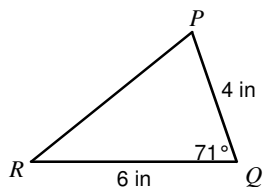
8) $\left\{\frac{1}{2}, 3\right\}$

Area of a Triangle

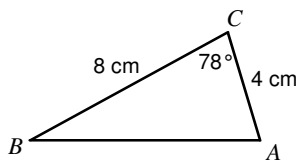
© 2014 Kuta Software LLC. All rights reserved.

Find the area of each triangle to the nearest tenth.

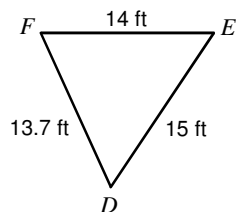
1)



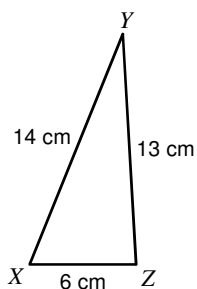
2)



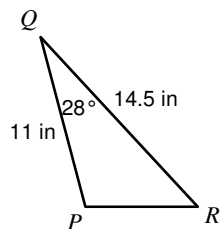
3)



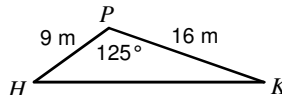
4)



5)



6)



Solve each equation by using the Quadratic Formula.

7) $3v^2 + v - 2 = -4v$

8) $15b^2 - 35b + 15 = 5b^2$

9) $-2n^2 - 10n + 8 = -5n^2$

10) $12x^2 + 27x + 5 = -1$

Answers to Area of a Triangle

1) 11.3 in^2

5) 37.4 in^2

9) $\left\{\frac{4}{3}, 2\right\}$

2) 15.7 cm^2

6) 59 m^2

10) $\left\{-\frac{1}{4}, -2\right\}$

3) 87.3 ft^2

7) $\left\{\frac{1}{3}, -2\right\}$

4) 38.9 cm^2

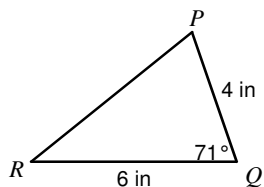
8) $\left\{\frac{1}{2}, 3\right\}$

Area of a Triangle

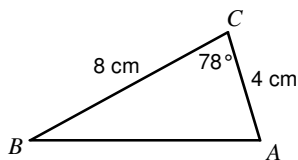
© 2014 Kuta Software LLC. All rights reserved.

Find the area of each triangle to the nearest tenth.

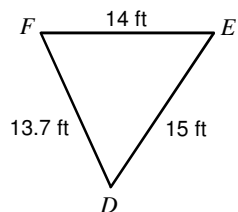
1)



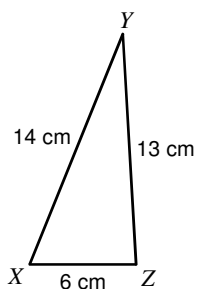
2)



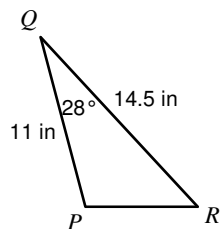
3)



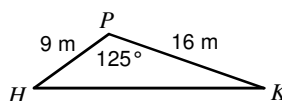
4)



5)



6)



Solve each equation by using the Quadratic Formula.

7) $3v^2 + v - 2 = -4v$

8) $15b^2 - 35b + 15 = 5b^2$

9) $-2n^2 - 10n + 8 = -5n^2$

10) $12x^2 + 27x + 5 = -1$

Answers to Area of a Triangle

1) 11.3 in^2

5) 37.4 in^2

9) $\left\{\frac{4}{3}, 2\right\}$

2) 15.7 cm^2

6) 59 m^2

10) $\left\{-\frac{1}{4}, -2\right\}$

3) 87.3 ft^2

7) $\left\{\frac{1}{3}, -2\right\}$

4) 38.9 cm^2

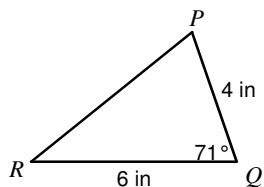
8) $\left\{\frac{1}{2}, 3\right\}$

Area of a Triangle

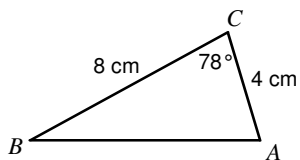
© 2014 Kuta Software LLC. All rights reserved.

Find the area of each triangle to the nearest tenth.

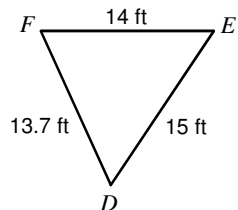
1)



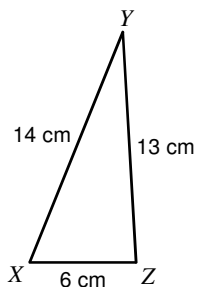
2)



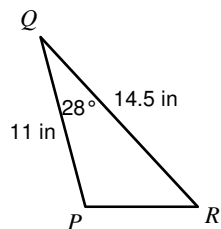
3)



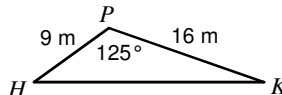
4)



5)



6)



Solve each equation by using the Quadratic Formula.

7) $3v^2 + v - 2 = -4v$

8) $15b^2 - 35b + 15 = 5b^2$

9) $-2n^2 - 10n + 8 = -5n^2$

10) $12x^2 + 27x + 5 = -1$

Answers to Area of a Triangle

1) 11.3 in^2

5) 37.4 in^2

9) $\left\{\frac{4}{3}, 2\right\}$

2) 15.7 cm^2

6) 59 m^2

10) $\left\{-\frac{1}{4}, -2\right\}$

3) 87.3 ft^2

7) $\left\{\frac{1}{3}, -2\right\}$

4) 38.9 cm^2

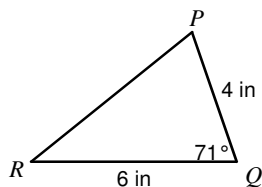
8) $\left\{\frac{1}{2}, 3\right\}$

Area of a Triangle

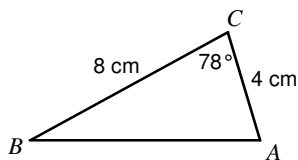
© 2014 Kuta Software LLC. All rights reserved.

Find the area of each triangle to the nearest tenth.

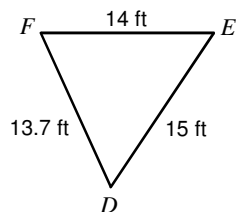
1)



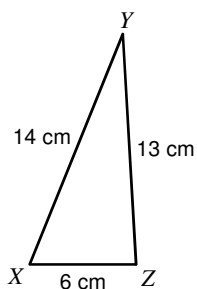
2)



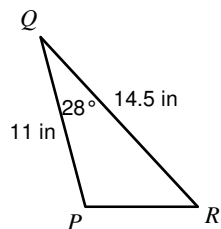
3)



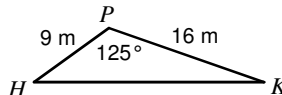
4)



5)



6)



Solve each equation by using the Quadratic Formula.

7) $3v^2 + v - 2 = -4v$

8) $15b^2 - 35b + 15 = 5b^2$

9) $-2n^2 - 10n + 8 = -5n^2$

10) $12x^2 + 27x + 5 = -1$

Answers to Area of a Triangle

1) 11.3 in^2

5) 37.4 in^2

9) $\left\{\frac{4}{3}, 2\right\}$

2) 15.7 cm^2

6) 59 m^2

10) $\left\{-\frac{1}{4}, -2\right\}$

3) 87.3 ft^2

7) $\left\{\frac{1}{3}, -2\right\}$

4) 38.9 cm^2

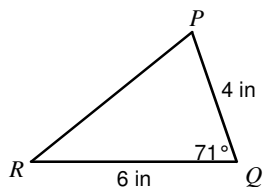
8) $\left\{\frac{1}{2}, 3\right\}$

Area of a Triangle

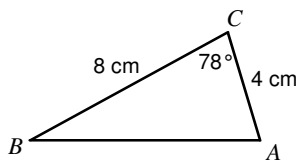
© 2014 Kuta Software LLC. All rights reserved.

Find the area of each triangle to the nearest tenth.

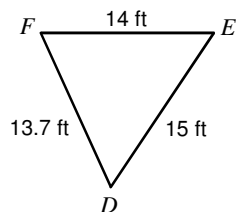
1)



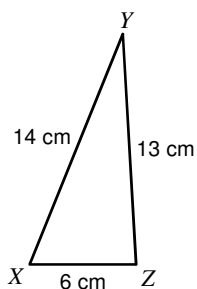
2)



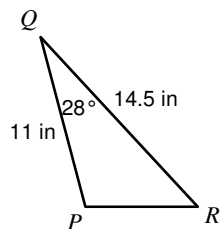
3)



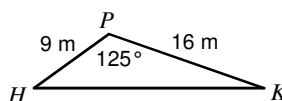
4)



5)



6)



Solve each equation by using the Quadratic Formula.

7) $3v^2 + v - 2 = -4v$

8) $15b^2 - 35b + 15 = 5b^2$

9) $-2n^2 - 10n + 8 = -5n^2$

10) $12x^2 + 27x + 5 = -1$

Answers to Area of a Triangle

1) 11.3 in^2

5) 37.4 in^2

9) $\left\{\frac{4}{3}, 2\right\}$

2) 15.7 cm^2

6) 59 m^2

10) $\left\{-\frac{1}{4}, -2\right\}$

3) 87.3 ft^2

7) $\left\{\frac{1}{3}, -2\right\}$

4) 38.9 cm^2

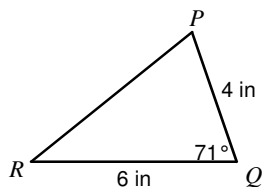
8) $\left\{\frac{1}{2}, 3\right\}$

Area of a Triangle

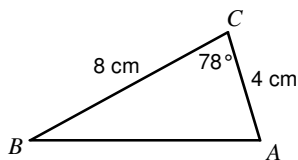
© 2014 Kuta Software LLC. All rights reserved.

Find the area of each triangle to the nearest tenth.

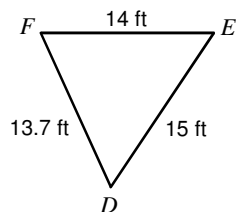
1)



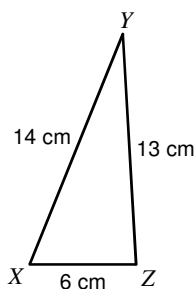
2)



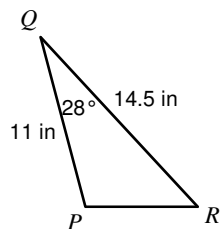
3)



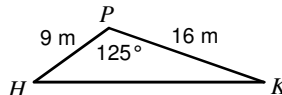
4)



5)



6)



Solve each equation by using the Quadratic Formula.

7) $3v^2 + v - 2 = -4v$

8) $15b^2 - 35b + 15 = 5b^2$

9) $-2n^2 - 10n + 8 = -5n^2$

10) $12x^2 + 27x + 5 = -1$

Answers to Area of a Triangle

1) 11.3 in^2

5) 37.4 in^2

9) $\left\{\frac{4}{3}, 2\right\}$

2) 15.7 cm^2

6) 59 m^2

10) $\left\{-\frac{1}{4}, -2\right\}$

3) 87.3 ft^2

7) $\left\{\frac{1}{3}, -2\right\}$

4) 38.9 cm^2

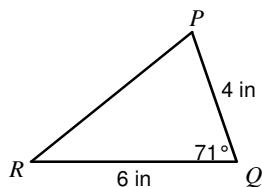
8) $\left\{\frac{1}{2}, 3\right\}$

Area of a Triangle

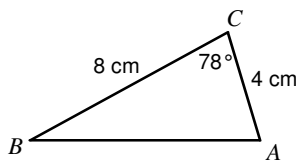
© 2014 Kuta Software LLC. All rights reserved.

Find the area of each triangle to the nearest tenth.

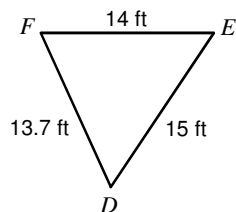
1)



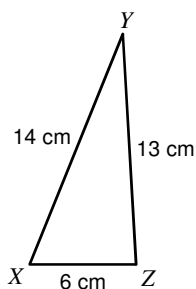
2)



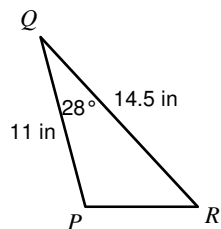
3)



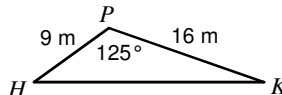
4)



5)



6)



Solve each equation by using the Quadratic Formula.

7) $3v^2 + v - 2 = -4v$

8) $15b^2 - 35b + 15 = 5b^2$

9) $-2n^2 - 10n + 8 = -5n^2$

10) $12x^2 + 27x + 5 = -1$

Answers to Area of a Triangle

1) 11.3 in^2

5) 37.4 in^2

9) $\left\{\frac{4}{3}, 2\right\}$

2) 15.7 cm^2

6) 59 m^2

10) $\left\{-\frac{1}{4}, -2\right\}$

3) 87.3 ft^2

7) $\left\{\frac{1}{3}, -2\right\}$

4) 38.9 cm^2

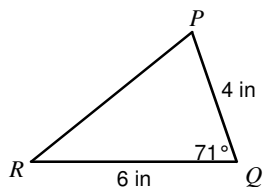
8) $\left\{\frac{1}{2}, 3\right\}$

Area of a Triangle

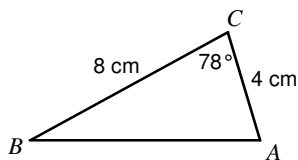
© 2014 Kuta Software LLC. All rights reserved.

Find the area of each triangle to the nearest tenth.

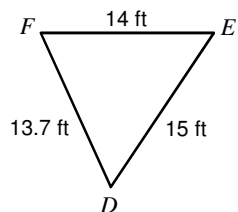
1)



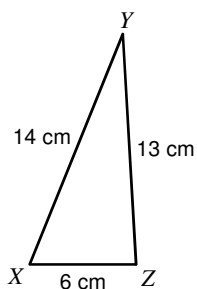
2)



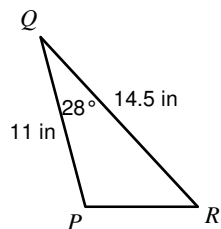
3)



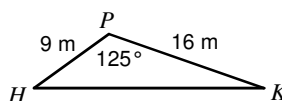
4)



5)



6)



Solve each equation by using the Quadratic Formula.

7) $3v^2 + v - 2 = -4v$

8) $15b^2 - 35b + 15 = 5b^2$

9) $-2n^2 - 10n + 8 = -5n^2$

10) $12x^2 + 27x + 5 = -1$

Answers to Area of a Triangle

1) 11.3 in^2

5) 37.4 in^2

9) $\left\{\frac{4}{3}, 2\right\}$

2) 15.7 cm^2

6) 59 m^2

10) $\left\{-\frac{1}{4}, -2\right\}$

3) 87.3 ft^2

7) $\left\{\frac{1}{3}, -2\right\}$

4) 38.9 cm^2

8) $\left\{\frac{1}{2}, 3\right\}$